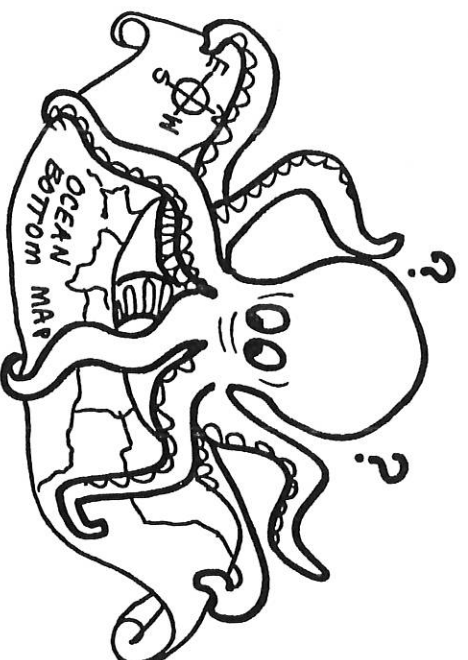


# MAP SKILLS & GEOGRAPHY

## Grades 2-3

### Skills Exercises



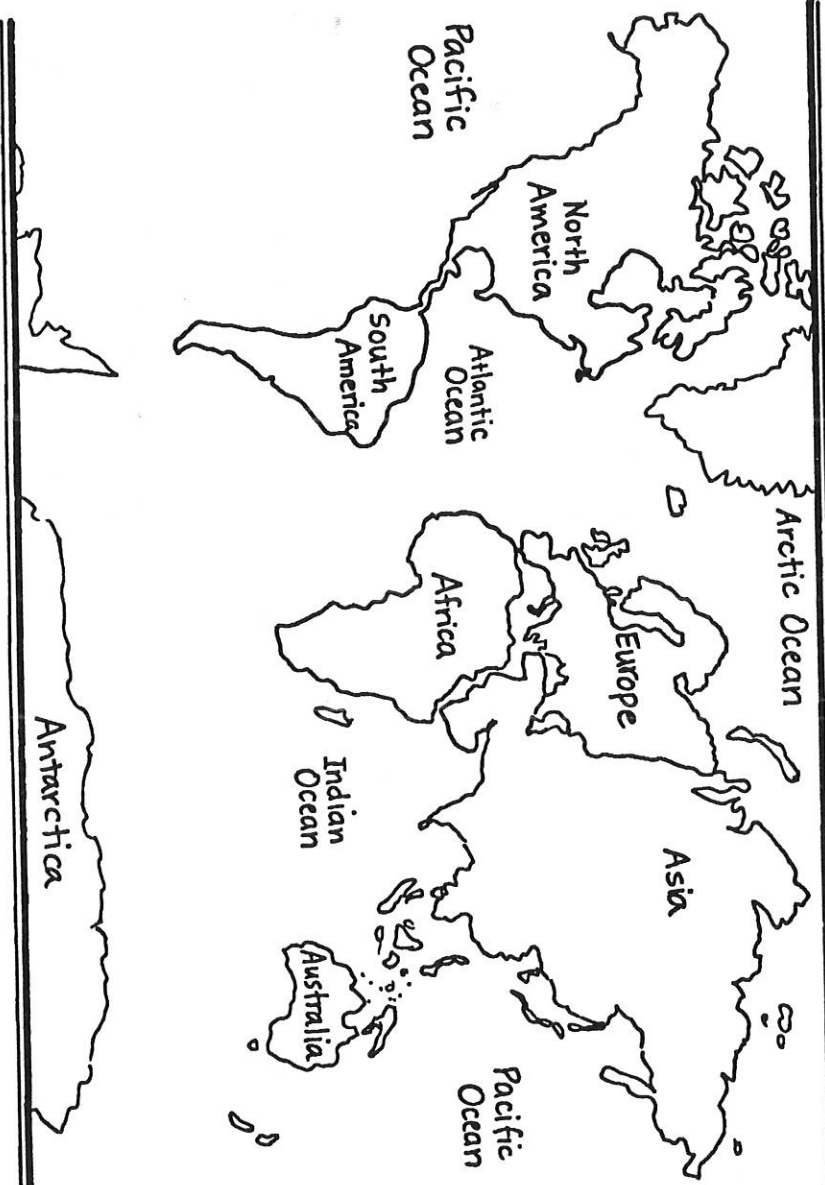
# TABLE OF CONTENTS

---


<b>Introduction:</b> Celebrate Basic Social Studies Skills .....	7
<b>Skills Checklist</b> .....	8
 <b>Skills Exercises</b> .....	9
Where Are You in the Universe? . . . (Locate Own Address) .....	10
Once upon a Table . . . (Define a Map • Make a Map) .....	12
Digging for Treasure . . . (Parts of a Map) .....	14
Map Mix-up . . . (Map Titles) .....	15
Delivery for Bigfoot . . . (Directions on a Map) .....	16
A Dangerous Delivery . . . (Directions on a Map) .....	17
Delivery by Dinosaur . . . (Directions on a Map) .....	18
Who Gets the Milk? . . . (Directions on a Map) .....	19
Who Ordered the Pizza? . . . (Map Symbols) .....	20
Map in a Candy Box . . . (Use a Map Key) .....	22
A New Desert Route . . . (Use a Map Key) .....	23
Special Delivery . . . (Use a Map Key) .....	24
Toy Store Confusion . . . (Make a Map Key) .....	25
Mush! Mush! Rush! . . . (Use a Map Scale) .....	26
The Picnic under the Picnic . . . (Use a Map Scale) .....	27
Island Hopping . . . (Use a Map Scale) .....	28
So Many Boxes! . . . (Landforms) .....	29
Lobsters for the World . . . (Globe • Hemispheres) .....	30
Delivery Anywhere! . . . (Oceans • Continents) .....	32
Truckloads of Telephones . . . (North America's Countries) .....	33
Mix-up at the Post Office . . . (Cities, States, & Countries) .....	34

# Where Are You in the Universe? cont.

Color your continent. Put a star where you live.



Draw a picture of your home.



Name \_\_\_\_\_

Use with page 10.

Locate Own Address

# Once upon a Table

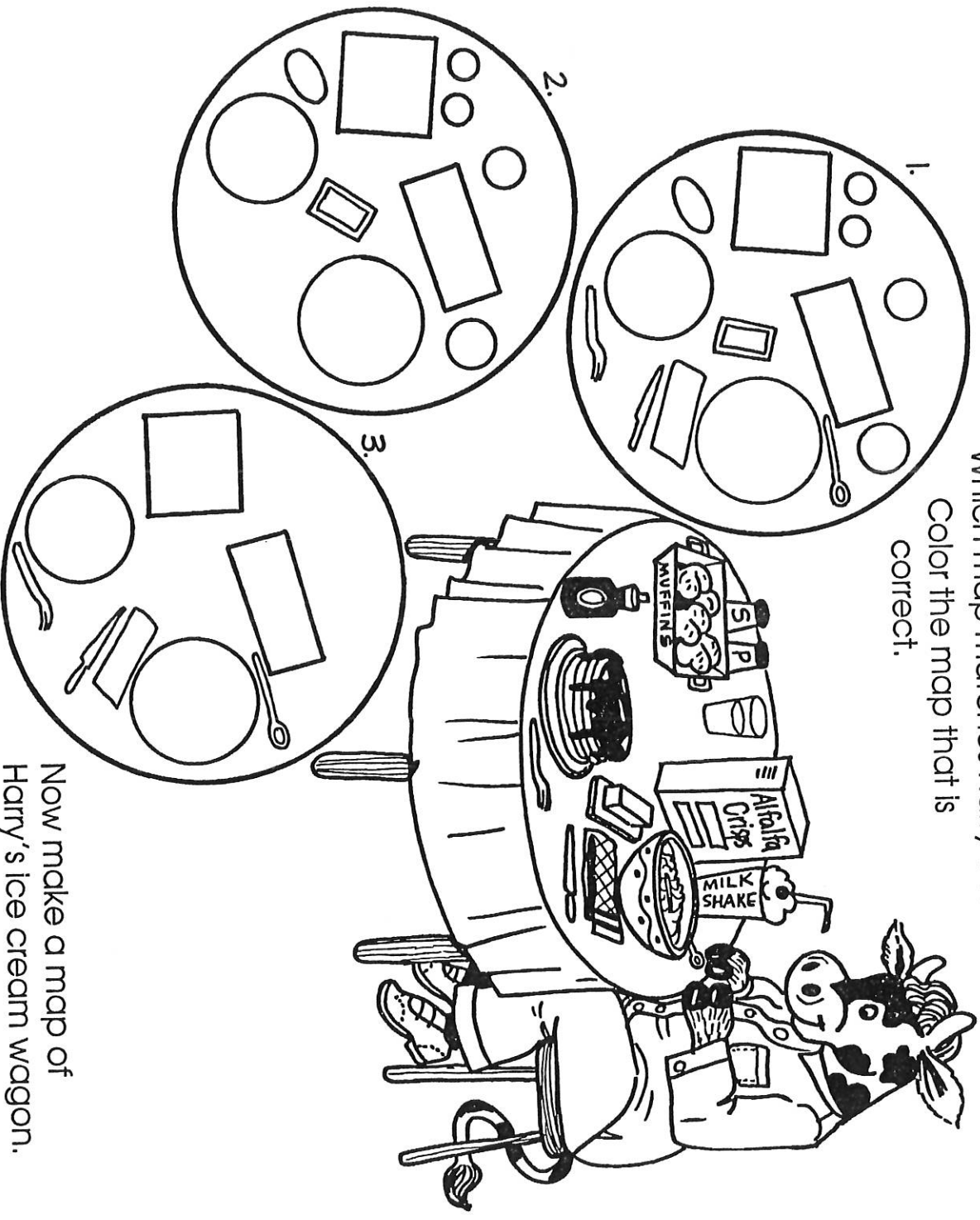
It's not easy delivering ice cream to desert folks on a hot summer day. Harry needs a big breakfast before starting his busy day.

A map is a flat picture of a real place.

Look carefully at the table. Then look at the maps of the table.

Which map matches Harry's table?

Color the map that is correct.



Now make a map of Harry's ice cream wagon.

See the picture on the next page (page 13).

Name \_\_\_\_\_

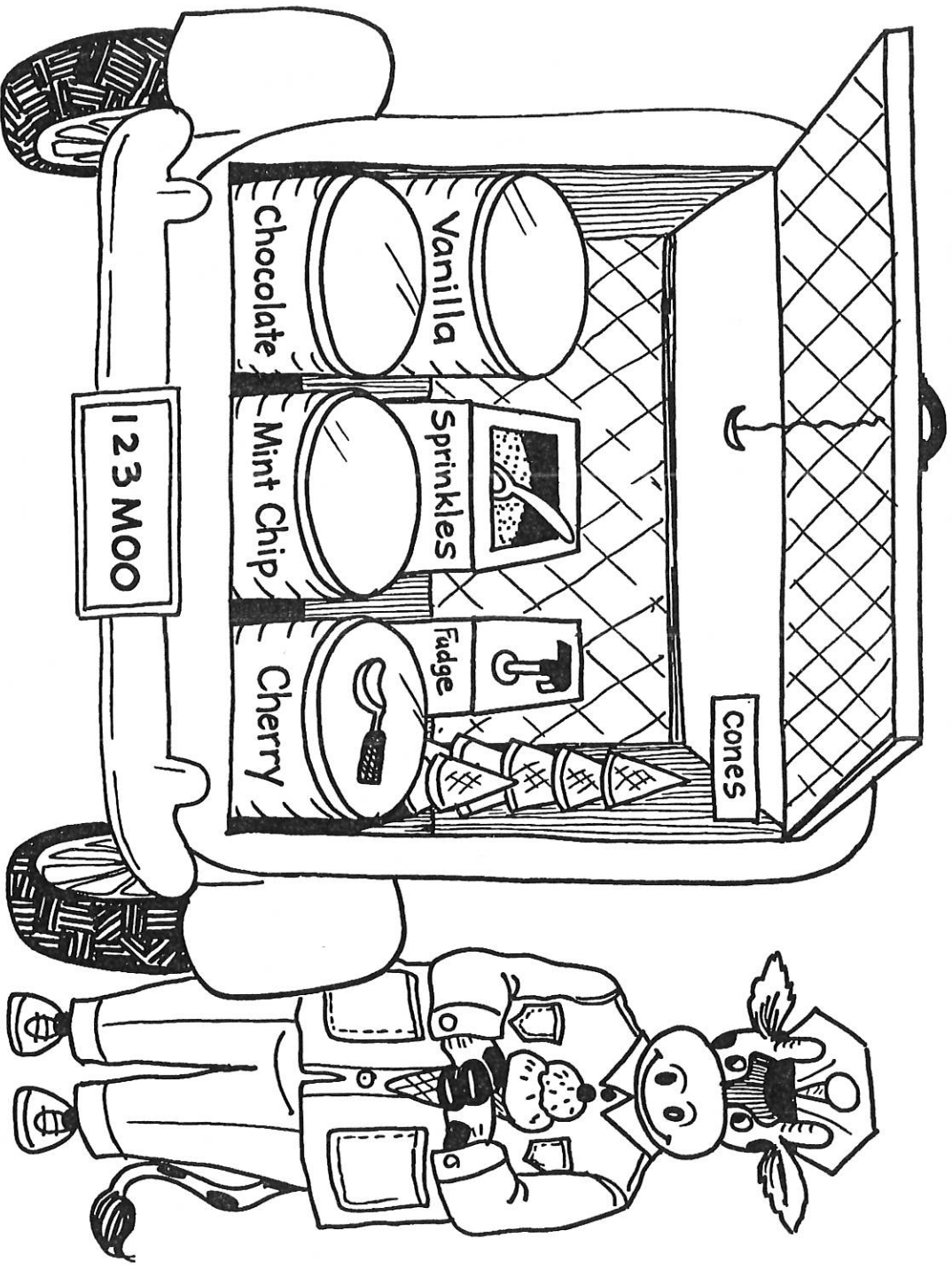
Use with page 13.

12

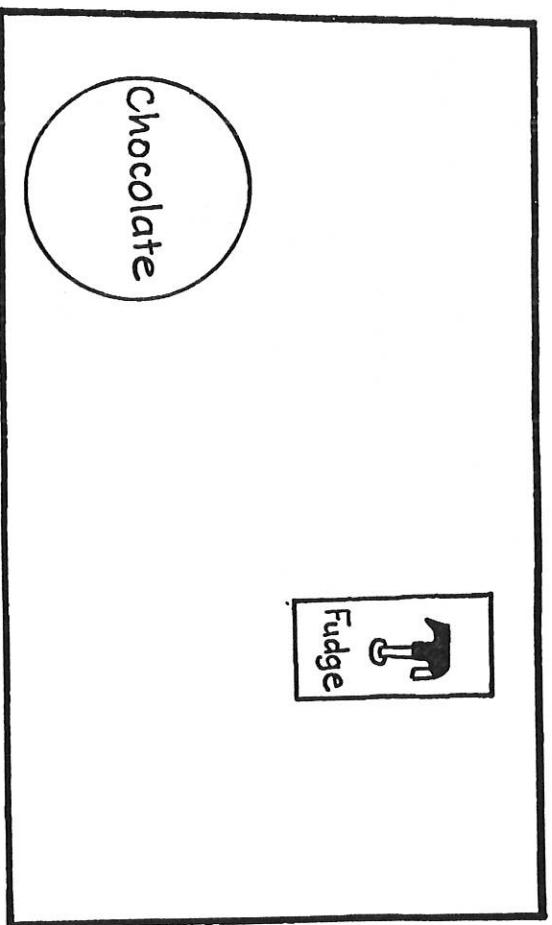
Define a Map • Make a Map



Harry's ice cream delivery wagon is loaded and ready to go.  
Make a map of his wagon for him, so he will know where everything belongs!



Finish the map  
of Harry's  
wagon here.  
Label each  
item.



Name \_\_\_\_\_

Use with page 12.

# Digging for Treasure

Arvin's Airline is bringing treasure hunters to Skull Island to dig for treasure. They have found an old treasure map. Now they have to decide what it means.

Read about each part of the map. Follow the directions.

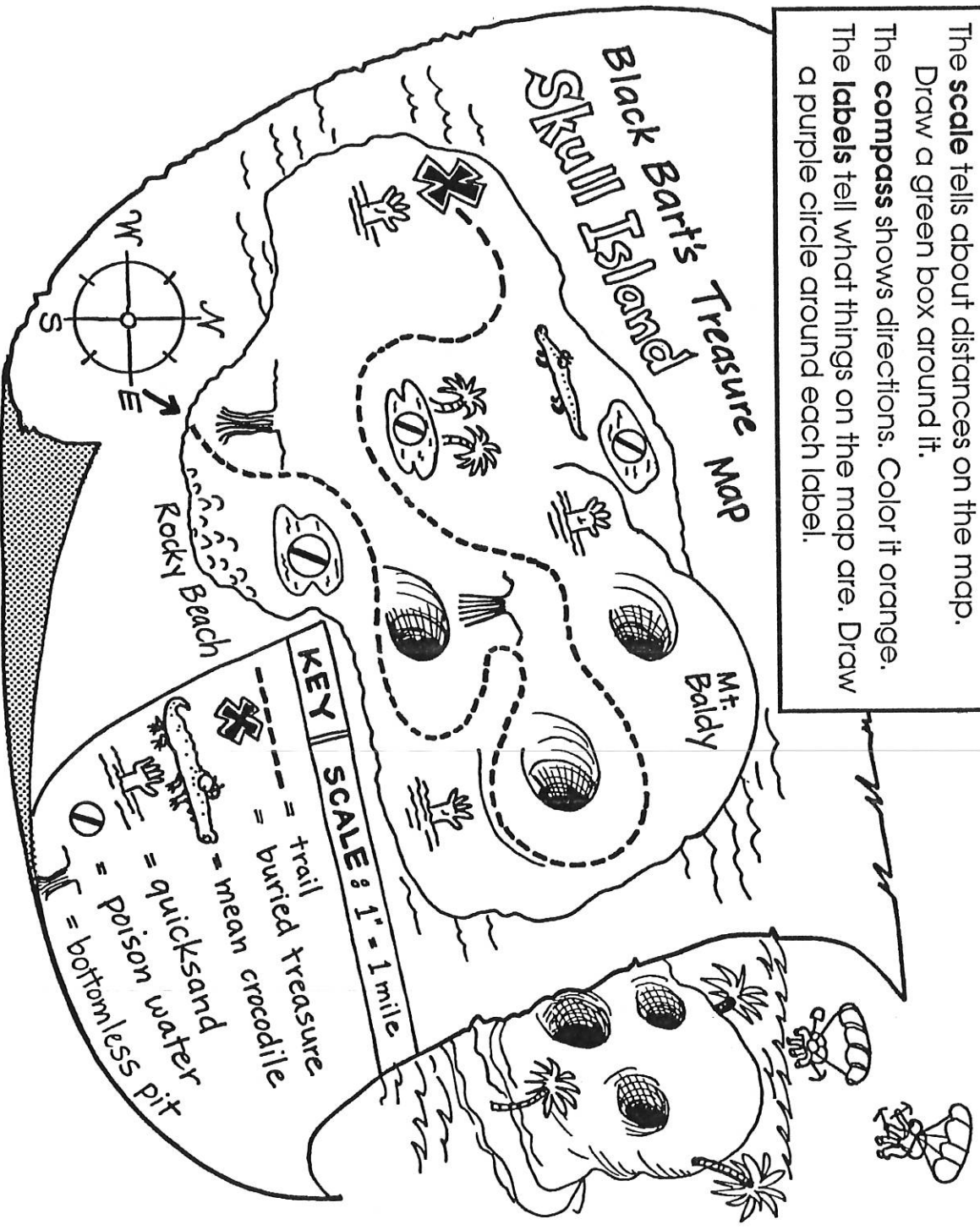
The **title** tells what the map is about. Draw a red circle around it.

The **map key** explains symbols and pictures that stand for things on the map. Color it yellow.

The **scale** tells about distances on the map. Draw a green box around it.

The **compass** shows directions. Color it orange.

The **labels** tell what things on the map are. Draw a purple circle around each label.



Name \_\_\_\_\_

# Map Mix-up

Carl Crane has a package to deliver on Maple Street. The titles have fallen off his maps, and he doesn't know which one to use. Choose the best title for each map. Circle it. Then color the map that Carl needs to make his delivery.

1.

1. Island Weather  
2. Products of Sugar Island  
3. Sugar Island Campground

2.

1. Lazy Lake Weather  
2. Lakeville Products  
3. Lazy Lake Campground

3.

1. Downtown Treetown  
2. Oakville Ballpark  
3. Treetown Airport

4.

1. Pat's Pets  
2. Oakville Mall  
3. Downtown Oakville

Name \_\_\_\_\_

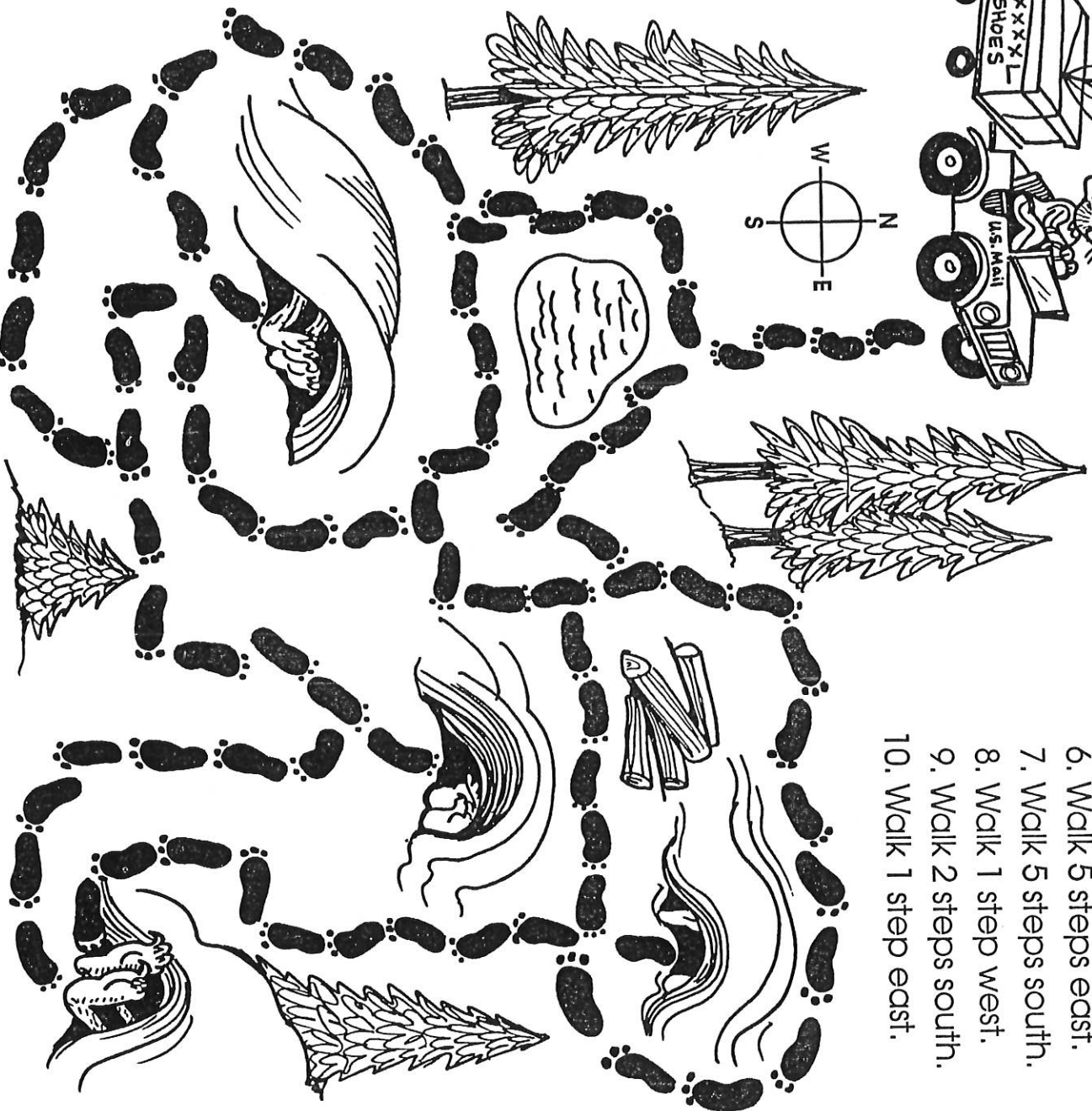
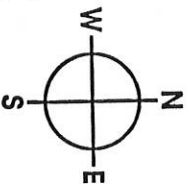

# Delivery for Bigfoot

Mail Carrier Millie has a delivery for Bigfoot.

Help her follow the footsteps to Bigfoot's cave.

Follow the directions.

Color a path along the footsteps as you go.



1. Walk 4 steps south.
2. Walk 2 steps west.
3. Walk 4 steps south.
4. Walk 6 steps east.
5. Walk 2 steps north.
6. Walk 5 steps east.
7. Walk 5 steps south.
8. Walk 1 step west.
9. Walk 2 steps south.
10. Walk 1 step east.

If you followed the directions correctly, you should be there!

Name \_\_\_\_\_




# A Dangerous Delivery

Francie Frog always dreads bringing mail to the swamp.

She is very careful when she reaches out to a mailbox!

Today she has several packages to deliver.

Help her find the right mailboxes.




Write **N, S, E, W,**  
**NE, SE, NW, or SW** in each blank.

1. Turtle's box is \_\_\_\_ of Toad's.
2. Crayfish's box is \_\_\_\_ of Lizard's.
3. Toad's box is 1 box \_\_\_\_ of Pelican's.
4. Rat's box is \_\_\_\_ of Crocodile's.
5. Possum's box is \_\_\_\_ of Crayfish's.

Write the answer in each blank.

6. \_\_\_\_ box is just south of Toad's.
7. Crayfish's box is west of \_\_\_\_.
8. \_\_\_\_ box is northwest of Crocodile's.
9. Is Pelican's north of Possum's? \_\_\_\_
10. Is Rat's box a little northeast of Lizard's? \_\_\_\_
11. Whose box is farthest north? \_\_\_\_



Name \_\_\_\_\_

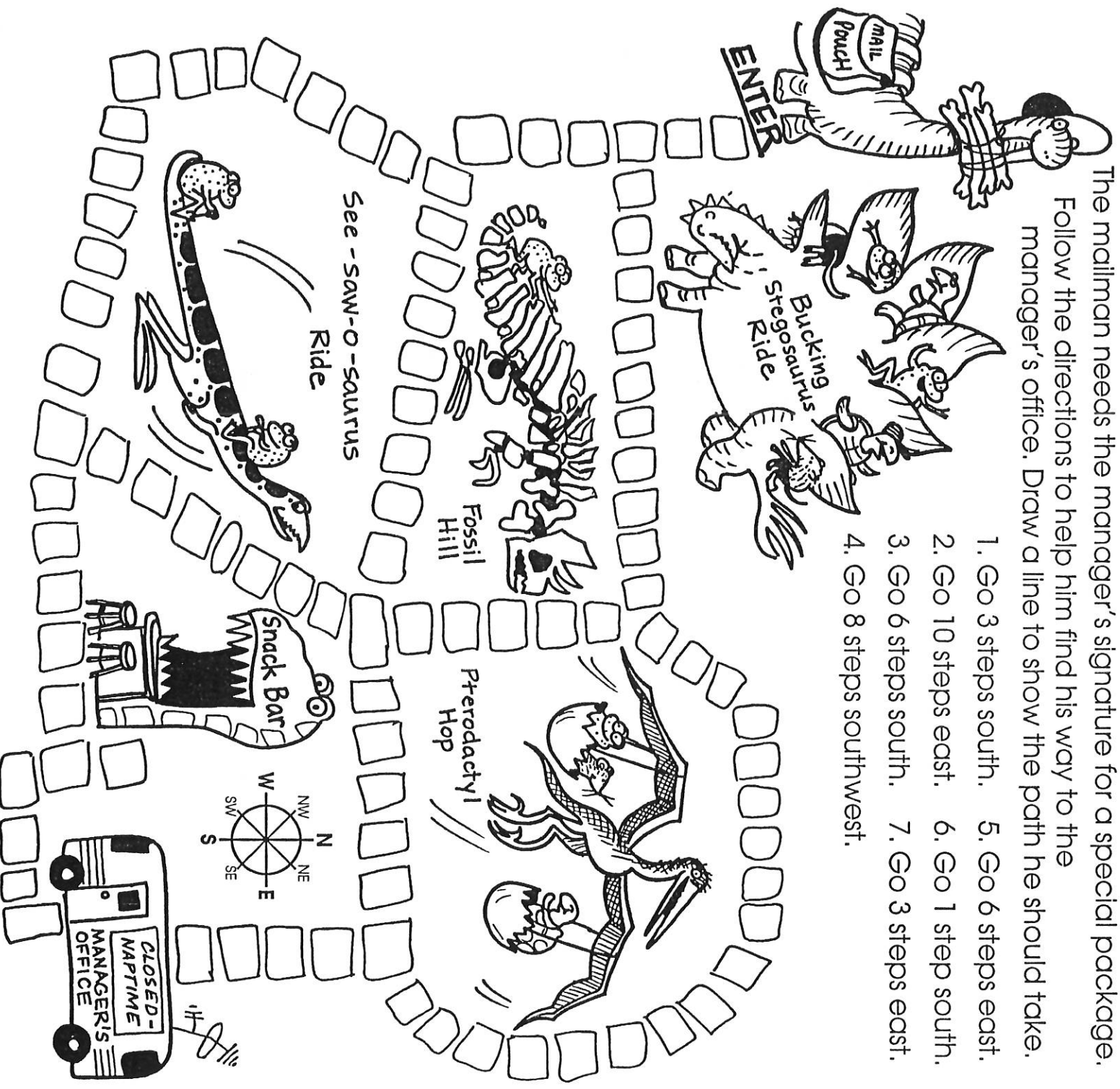
# Delivery by Dinosaur

Where is the manager of the Fossil Fun Park?

The mailman needs the manager's signature for a special package.

Follow the directions to help him find his way to the manager's office. Draw a line to show the path he should take.

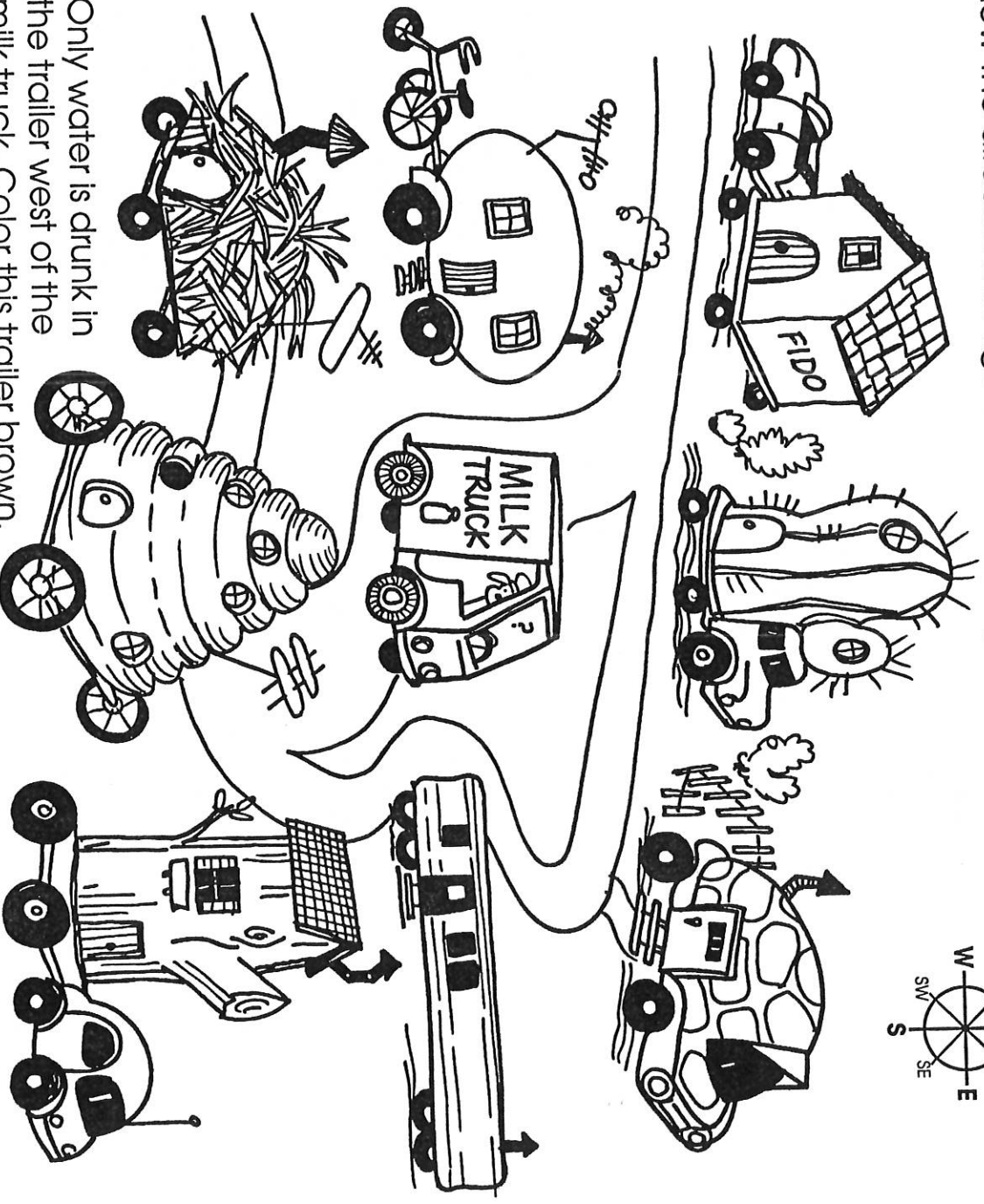
1. Go 3 steps south.
2. Go 10 steps east.
3. Go 6 steps south.
4. Go 8 steps southwest.
5. Go 6 steps east.
6. Go 1 step south.
7. Go 3 steps east.




Name \_\_\_\_\_

# Who Gets the Milk?

Here comes the milk truck to the Moptown Trailer Park! Follow the directions to figure out who will get milk.



- 
1. Only water is drunk in the trailer west of the milk truck. Color this trailer brown.
  2. Milk is delivered to the trailer northeast of the truck. Color this trailer green.
  3. Honey is the favorite drink in the trailer south of the truck. Color this trailer yellow.
  4. The animal in the trailer southeast of the truck only drinks soda pop. Color this trailer orange.
  5. The trailer north of the truck orders cactus juice. Draw a green box around it.
  6. Milk is chosen by the animals to the northwest and southwest of the truck.
- Circle these two trailers, and then color them brown.

Name \_\_\_\_\_

# Who Ordered the Pizza?

Poppie, the pizza delivery girl, is on her way to deliver a double cheese, double pepperoni pizza to some hungry pizza-lovers in Rivertown. Help her find her way around the city!

Many maps have symbols to show where things are. Symbols are small signs or pictures that stand for large things on the map.

Look at the symbols on the map key on the next page (page 21). The words tell what the symbols mean. Follow the directions and answer the questions. You'll also find out who ordered the pizza!

1. Is the pencil factory on Speedway Blvd.? \_\_\_\_\_
2. Trace the nature trail in red.
3. Color the playground green.
4. Is the shoe store in the same block as the grocery store? \_\_\_\_\_
5. Is the post office in the same block as the airport? \_\_\_\_\_
6. Is the movie theater next to the gas station? \_\_\_\_\_
7. What is across Bridge St. from the school? \_\_\_\_\_
8. What street is Poppie's Pizza on? \_\_\_\_\_
9. The church is on the corner of Speedway and \_\_\_\_\_ Blvd.
10. If Poppie runs out of gas by the church, how many blocks will she have to walk to get to the gas station? \_\_\_\_\_
11. The pizza is delivered to workers at the building on the southwest corner of Speedway Blvd. and North Ave. Who ordered the pizza? \_\_\_\_\_



Name \_\_\_\_\_

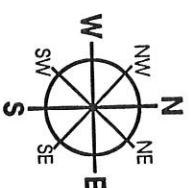
Use with the map on page 21.



# KEY

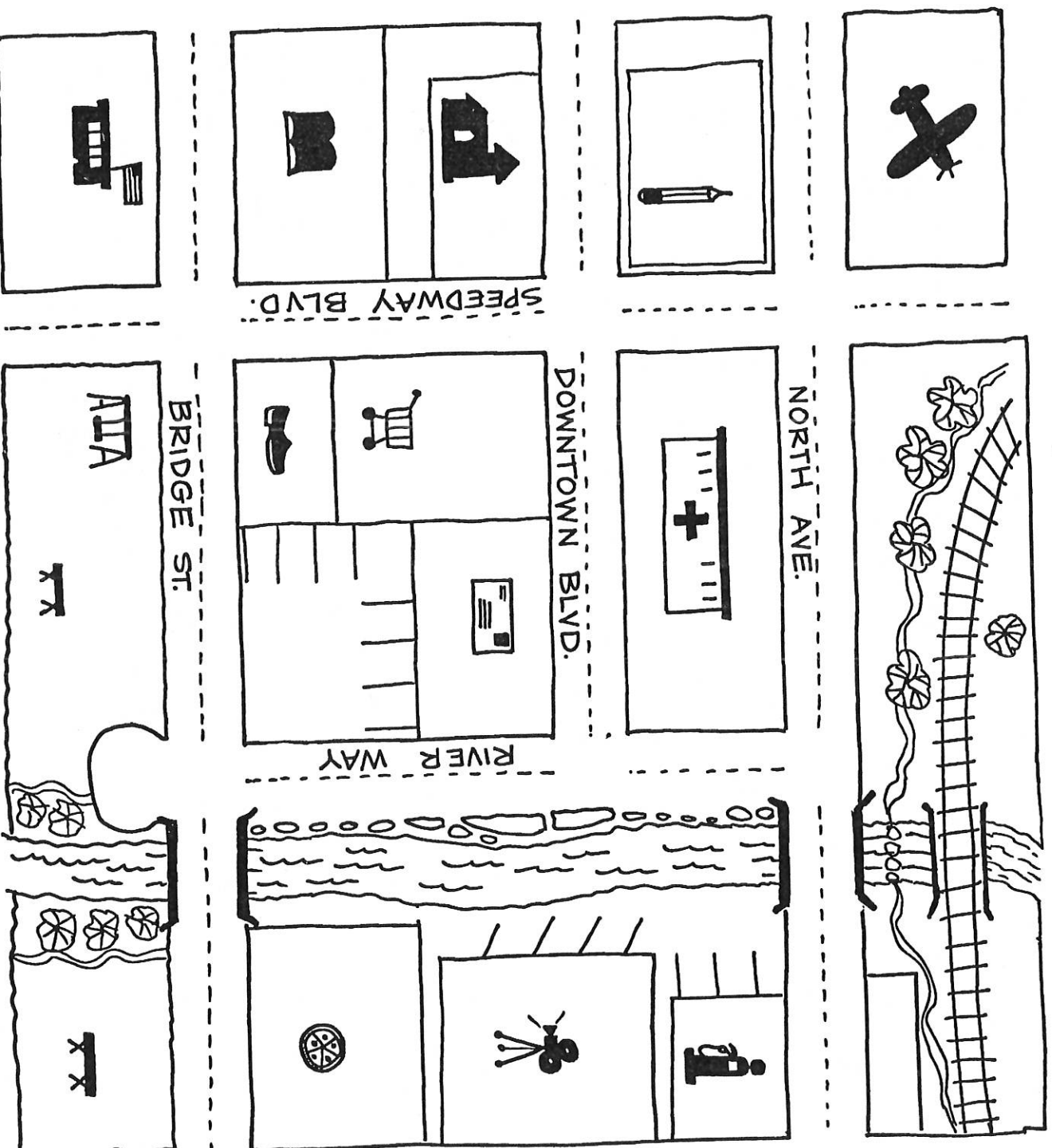
- = airport
- = pencil factory
- = church
- = library
- = school
- = hospital
- = post office

- = grocery store
- = shoe store
- = playground
- = picnic area
- = gas station
- = movie theater
- = Poppie's Pizza Palace



- = street
- = railroad track
- = bridge
- = nature trail

## Map of Rivertown



# Map in a Candy Box






Curtis, the candy delivery guy, has a large box of candy for Miss Pansy.

Oops! He spilled all the candy!

Luckily, the lid of the candy box has a map key that tells where each kind of candy belongs.

Use the key to put the candy back in the box before Miss Pansy opens the door!

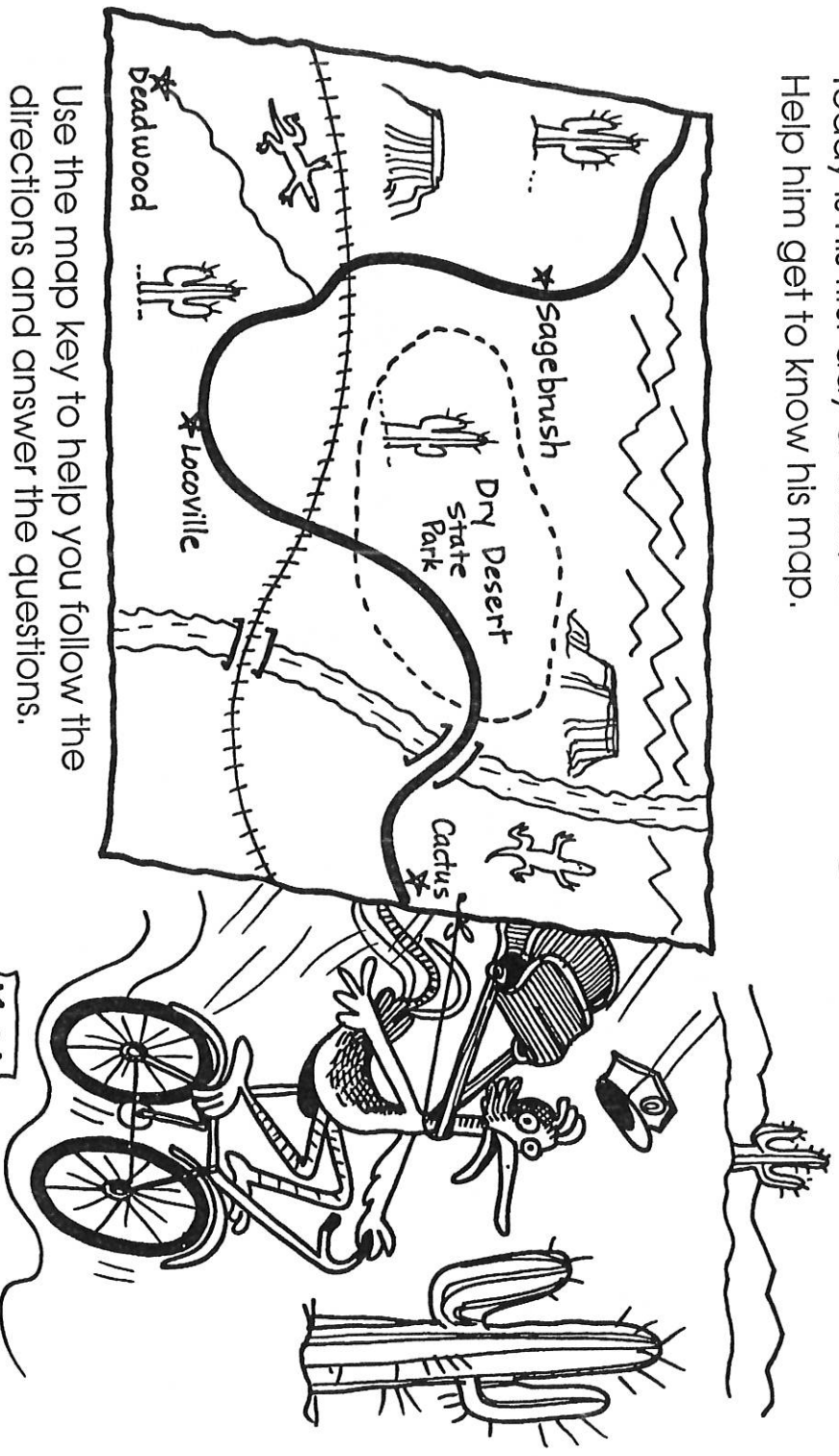
Draw and label the correct candy in each space in the box.



Name \_\_\_\_\_

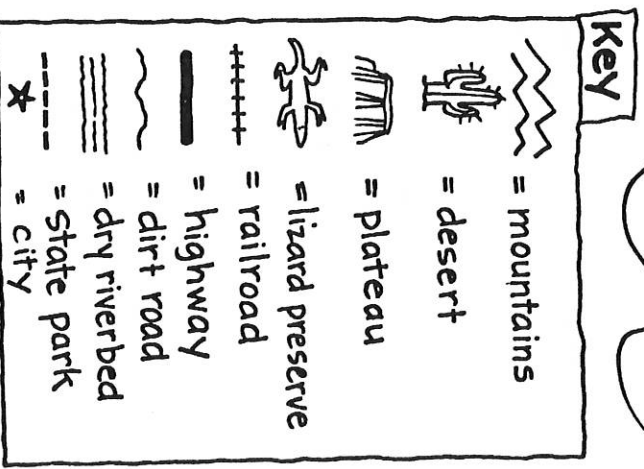
# A New Desert Route

Rod Roadrunner's mail route will take him across the desert every day. Today is his first day of work, and he's learning to read his new map. Help him get to know his map.



Use the map key to help you follow the directions and answer the questions.

1. If Rod takes the highway, what is one city he will pass? \_\_\_\_\_
2. Color the mountains purple.
3. Color the cactuses green.
4. Color the dry riverbed brown.
5. How many lizard preserves are there? \_\_\_\_\_
6. How many plateaus will he see? \_\_\_\_\_  
Color them red.
7. How many times does his route cross the railroad? \_\_\_\_\_
8. What is the name of the park? \_\_\_\_\_



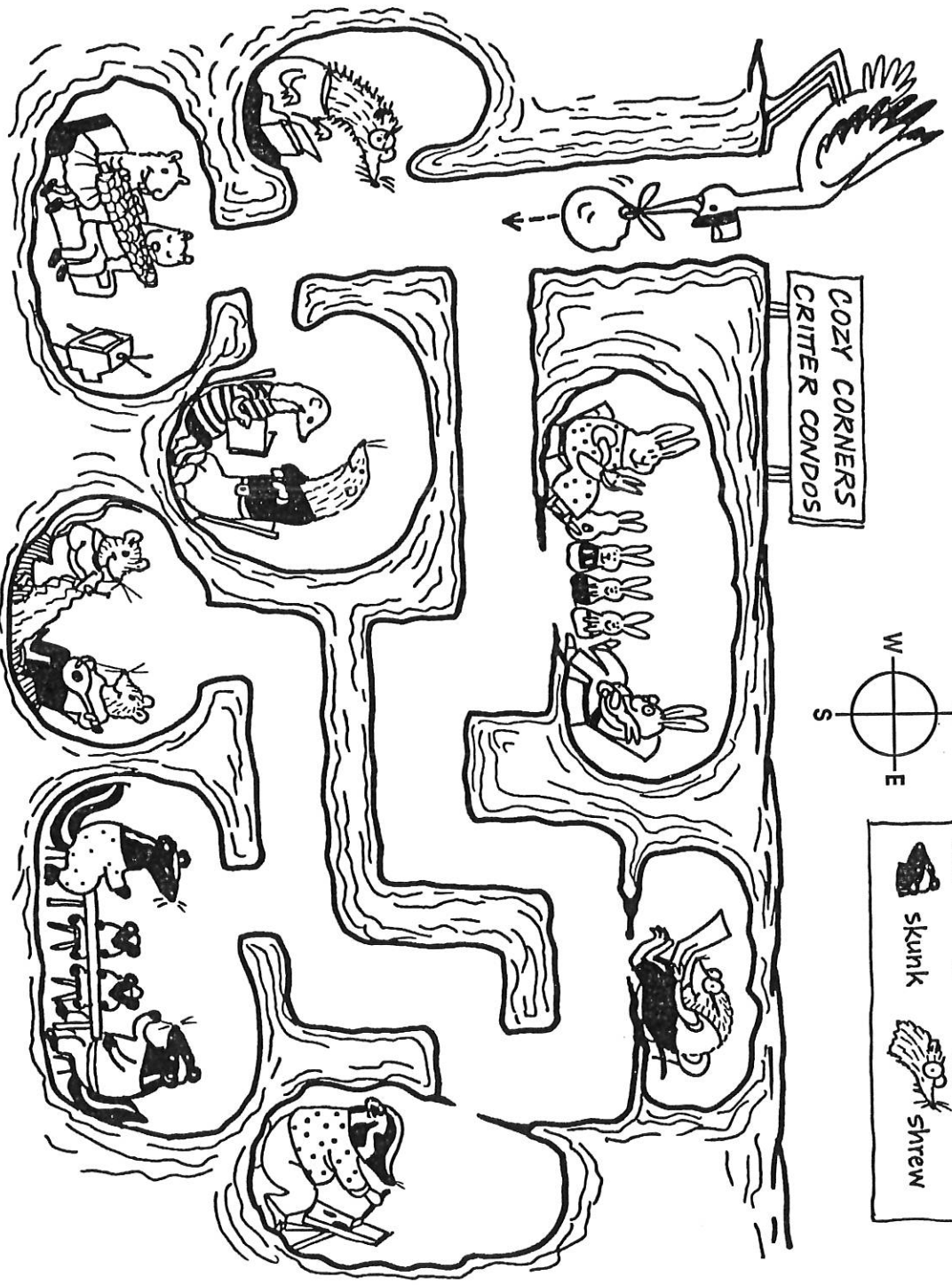

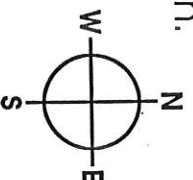
Name \_\_\_\_\_

# Special Delivery

The stork has a special delivery for one of the families in the Critter Condos.

Follow the directions to find out where the new baby belongs.

Draw a line to follow the stork's path.



Follow the directions.

1. Go south to the first turn.
2. Go east past the rabbit home.
3. Follow the path past mole's home.
4. Turn south and pass badger's art studio.
5. Go west past the skunks' home.
6. Turn south into the first doorway past the skunk home. This is the place for the special delivery!

Name \_\_\_\_\_

# Toy Store Confusion


Felix has a huge delivery of toys for the toy store.

All the toys need to be put on the shelves, but he is not sure where to put them.

Draw a symbol in the key to match each word.

Draw each symbol on one of the boxes to show what is in the box.

This will make it easier for Felix to get the toys in the right places.



PLAY-WITH-ME  
TOYS

KEY	
<input type="checkbox"/>	= toy cars and trucks
<input type="checkbox"/>	= footballs
<input type="checkbox"/>	= board games
<input type="checkbox"/>	= bikes
<input type="checkbox"/>	= dolls
<input type="checkbox"/>	= hockey sticks

Name \_\_\_\_\_

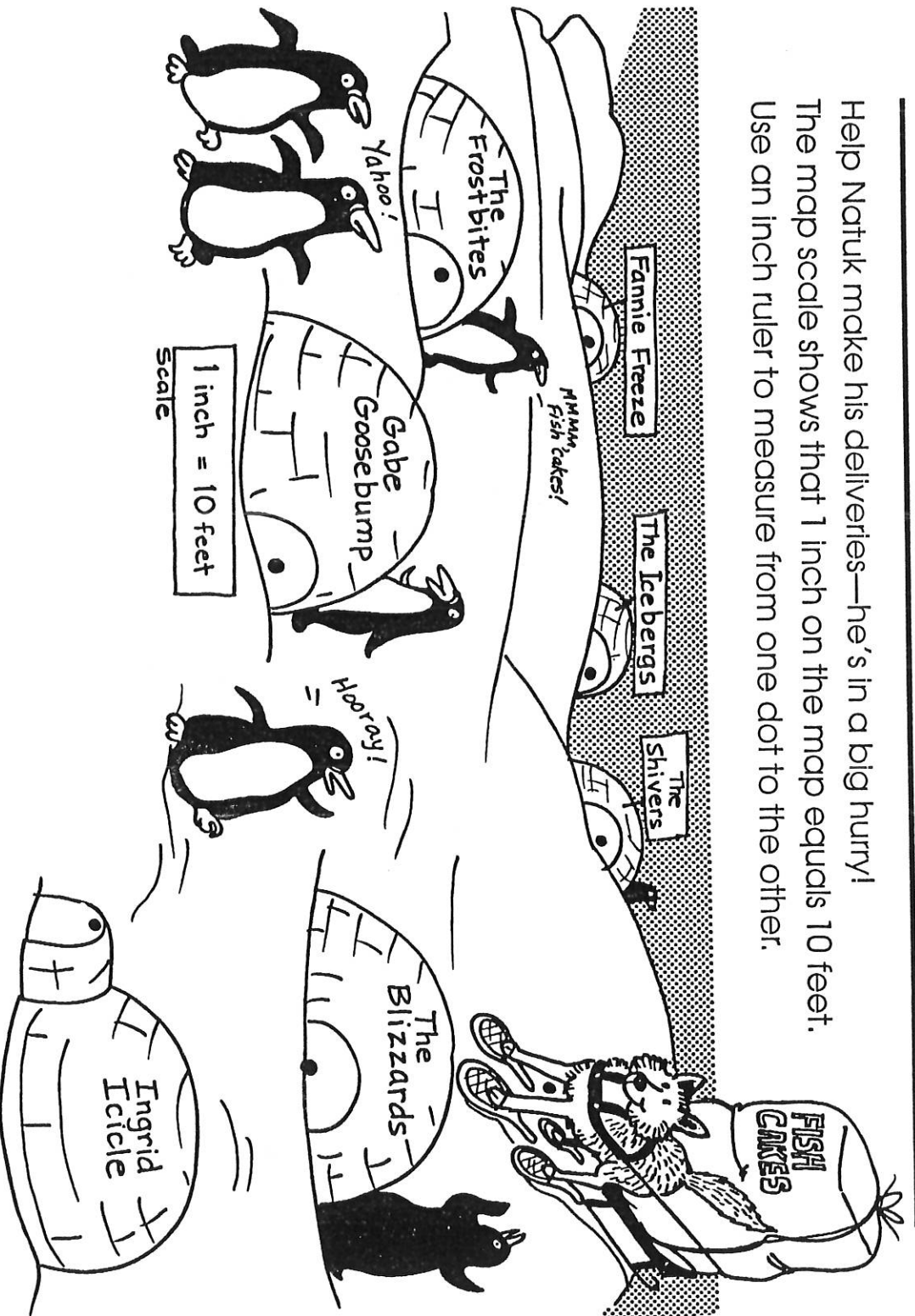


# Mushi! Mushi! Rush!

Help Natuk make his deliveries—he's in a big hurry!

The map scale shows that 1 inch on the map equals 10 feet.

Use an inch ruler to measure from one dot to the other.



1. How far will Natuk travel from Fannie's to the Frostbites'? \_\_\_\_\_ feet
2. Whose home is 20 feet northeast of Gabe's? \_\_\_\_\_
3. How far is it from Ingrid's to the Shivers'? \_\_\_\_\_ feet
4. How far will he travel from Ingrid's to the Blizzardards'? \_\_\_\_\_ feet
5. How far is it from the Blizzardards' to Gabe's home? \_\_\_\_\_ feet
6. Who lives farther from the Icebergs, the Frostbites or Ingrid? \_\_\_\_\_

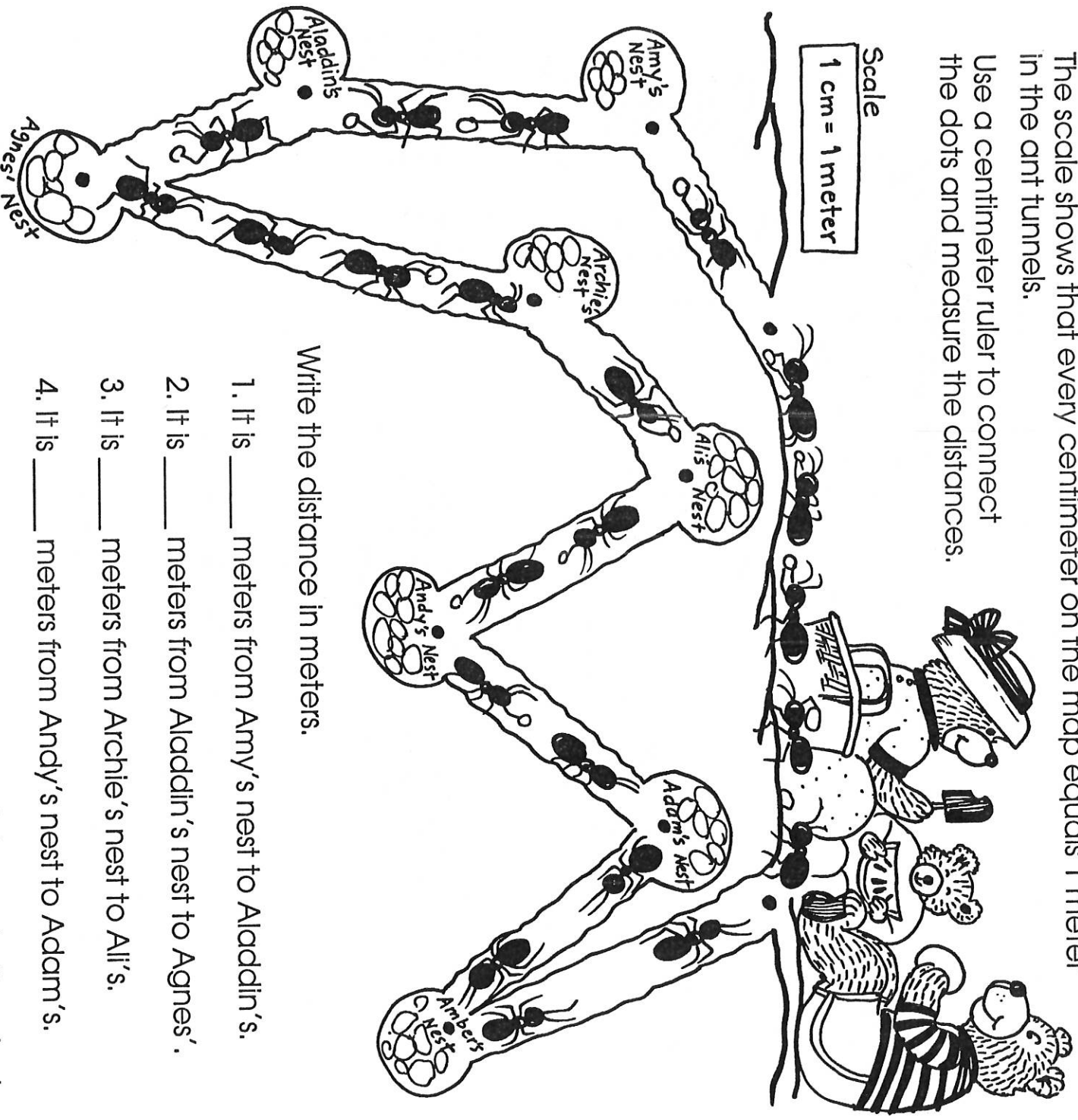
Name \_\_\_\_\_

# The Picnic under the Picnic

The Bear family does not know that another picnic is being planned right beneath their feet!

The scale shows that every centimeter on the map equals 1 meter in the ant tunnels.

Use a centimeter ruler to connect the dots and measure the distances.



Write the distance in meters.

1. It is \_\_\_\_\_ meters from Amy's nest to Aladdin's.
2. It is \_\_\_\_\_ meters from Aladdin's nest to Agnes'.
3. It is \_\_\_\_\_ meters from Archie's nest to Ali's.
4. It is \_\_\_\_\_ meters from Andy's nest to Adam's.
5. It is \_\_\_\_\_ meters from Amber's house to the picnic.

Name \_\_\_\_\_


# Island Hopping

Trader Doug the Sea Dog is always looking for a good trade.

He travels many miles trading things between the islands.

Use the scale on the map to find out how far he will travel today.

Use an inch ruler to measure the distance between the dots.



1. Doug took coconuts from Coconut Grove to Fish Lagoon. How far did he go? \_\_\_\_\_
2. He took a barrel of fish from Fish Lagoon to Flower Isle, \_\_\_\_\_ miles away.
3. He traded flowers for bananas on Banana Island—\_\_\_\_\_ miles from Flower Isle.
4. Next he went to Crab Atoll, \_\_\_\_\_ miles away, to trade bananas for crab cakes.
5. Then he headed for Home Island, \_\_\_\_\_ miles away from Crab Atoll, for a dinner of bananas and crab cakes.

Name \_\_\_\_\_

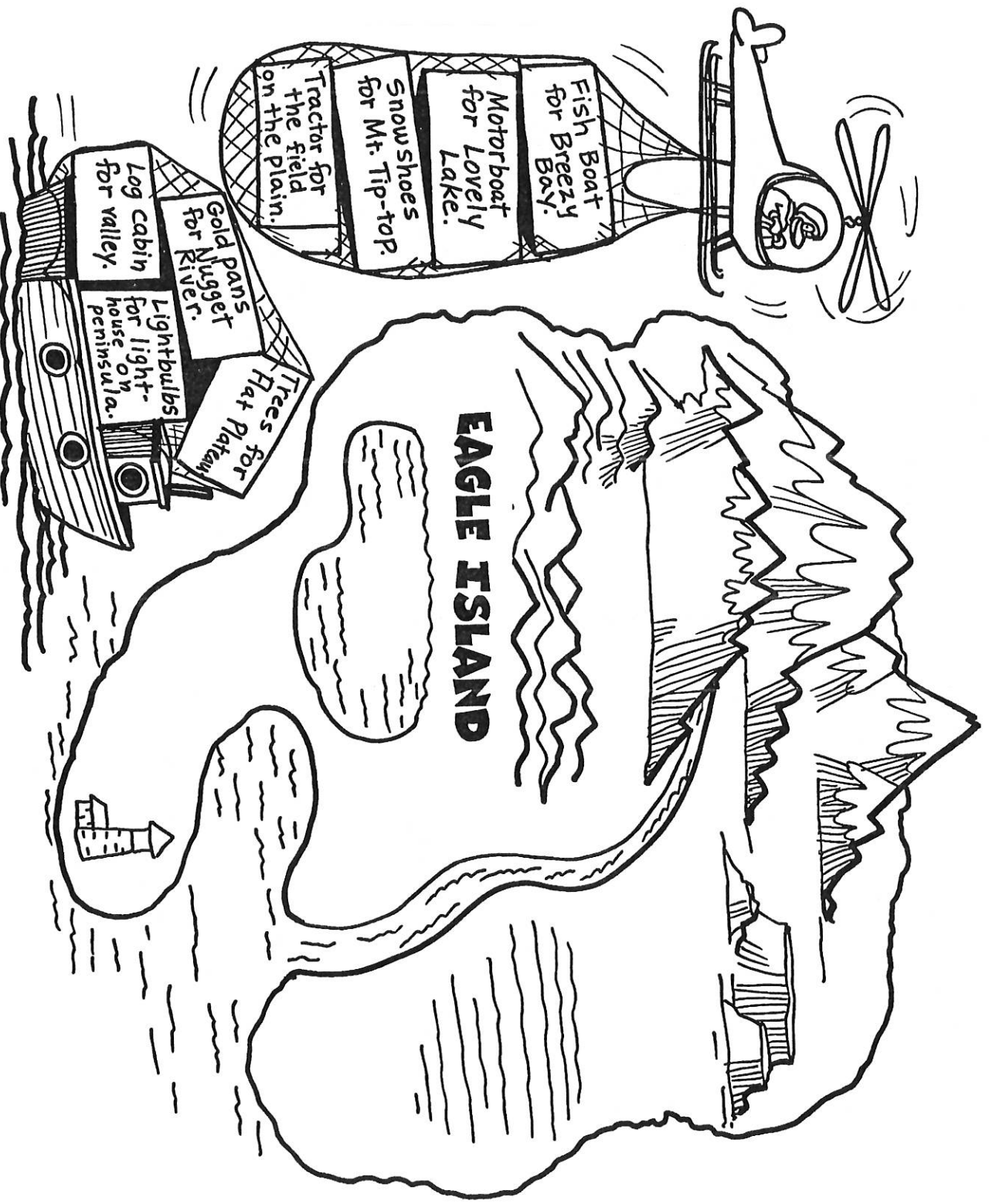


# So Many Boxes!

Everything needed on Eagle Island has to be delivered by boat or helicopter. Read the labels on the boxes.

Decide where each item needs to go on the map.

Draw a line from each box to the landform where the delivery will be made.



Name \_\_\_\_\_

# Lobsters for the World

Sam's Seafood Company delivers fresh lobsters from Boston to places all over the world. He needs to know a lot about the world in order to find all the right places.

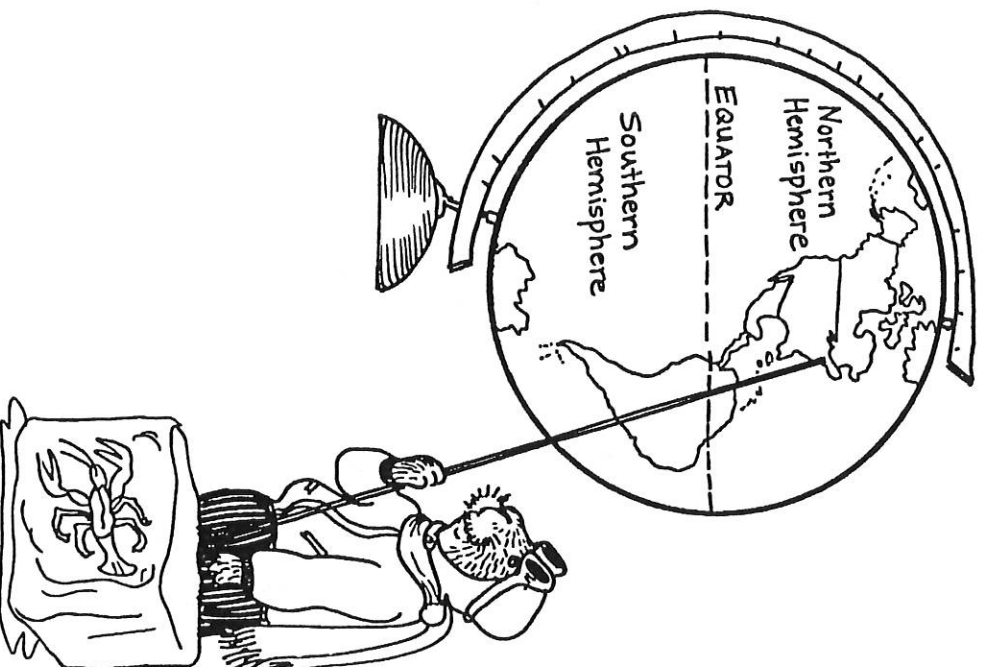
Most maps of the world are flat. But Sam knows that the Earth is not flat. It is round, like a ball.

So he uses a globe to help him with his travels.

A globe is a model of the Earth. The Earth is divided into 2 parts by an imaginary line called the equator. Each half of the Earth is called a hemisphere. This term means "half a ball."

The equator divides the Earth into the Northern and Southern Hemispheres.

Help Sam get to know the globe!



1. Trace the equator with a red crayon.

2. Color the Northern Hemisphere yellow. Color the Southern Hemisphere blue.

3. Draw a purple flag on the North Pole. Draw a red flag at the South Pole.

4. What continent is entirely in the Northern Hemisphere?

5. What continent is in both hemispheres?

6. What continent is totally in the Southern Hemisphere?

Name \_\_\_\_\_

Use with page 31.

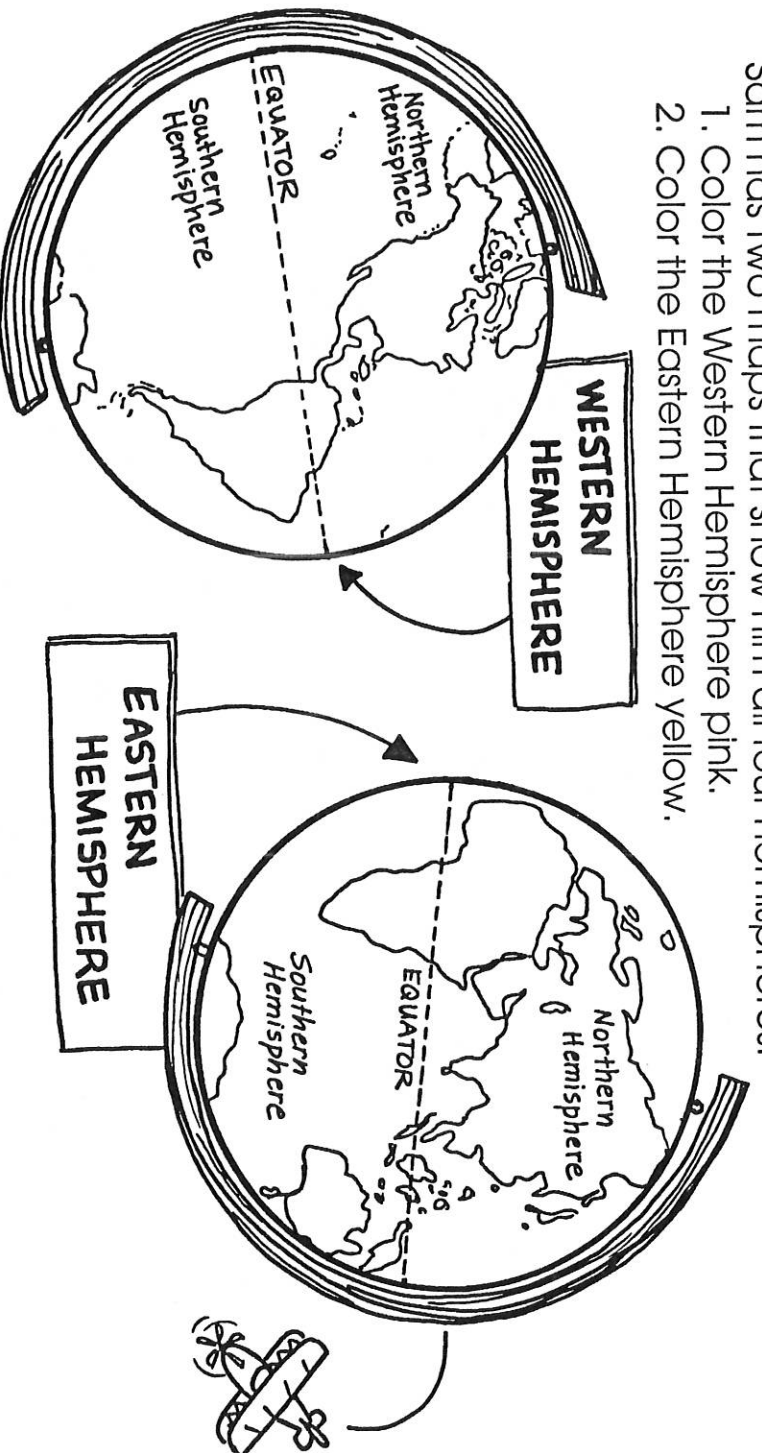
# Lobsters for the World, cont.

Sam knows that the Earth is also divided into halves from the North Pole to the South Pole.

This makes the Eastern Hemisphere and the Western Hemisphere.

Sam has two maps that show him all four hemispheres.

1. Color the Western Hemisphere pink.
2. Color the Eastern Hemisphere yellow.



Use these maps to help him find some of the places for his deliveries.  
Fill in the blanks to show what hemispheres each continent is in.

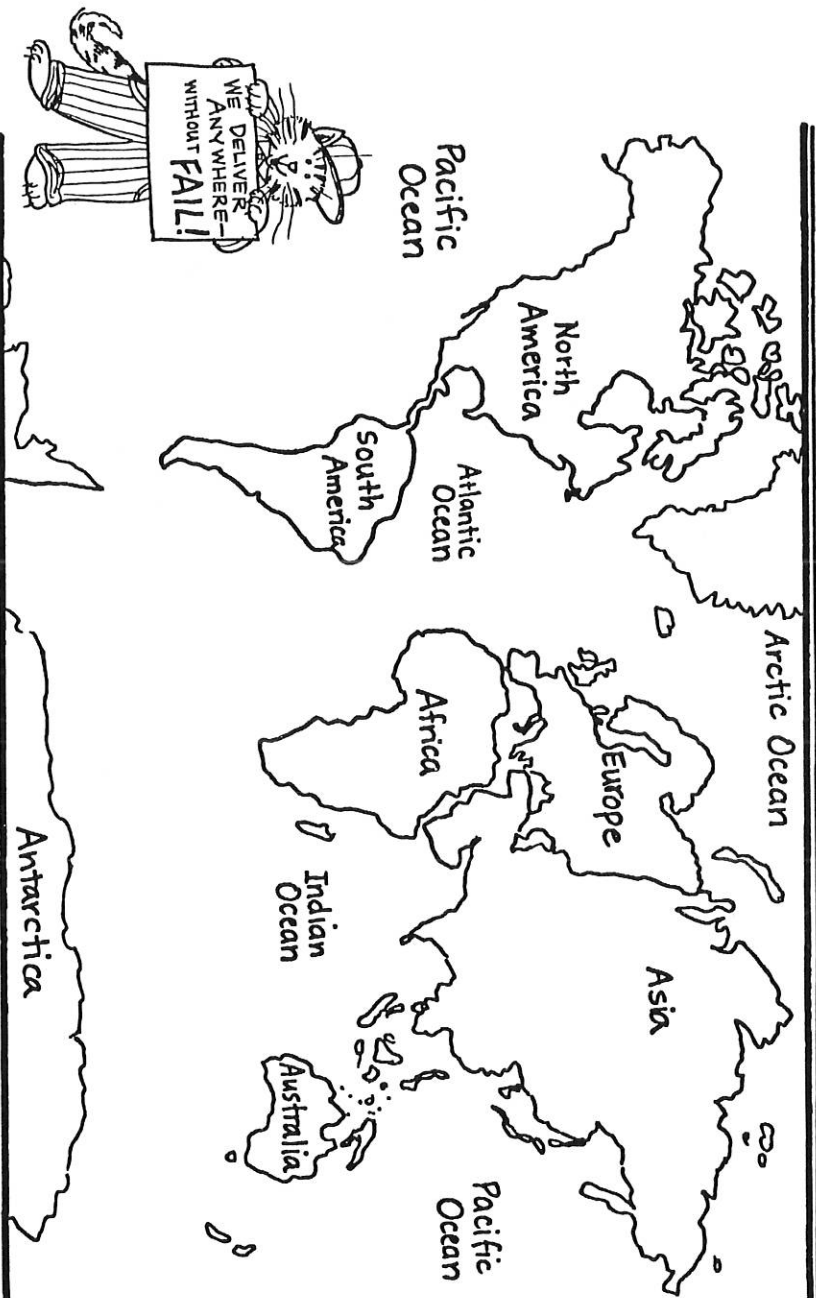
3. North America: Northern and \_\_\_\_\_ Hemispheres
4. South America: Southern, Western, and \_\_\_\_\_ Hemispheres
5. Australia: Southern and \_\_\_\_\_ Hemispheres
6. Africa: Eastern, Northern, and \_\_\_\_\_ Hemispheres
7. Asia: Northern, Southern, Western, and \_\_\_\_\_ Hemispheres
8. Europe: Eastern and \_\_\_\_\_ Hemispheres
9. Antarctica: Southern, \_\_\_\_\_, and \_\_\_\_\_ Hemispheres

Name \_\_\_\_\_

Use with page 30.

# Delivery Anywhere!

The U-Send-It Delivery Company will deliver to any place in the world. Here are just a few of the things they've been asked to deliver. Follow the directions to show the continents and oceans they've visited.



Follow the directions to color each place that receives a delivery. The name of the place for the delivery is in bold type.

U-Send-It Delivery delivers . . .

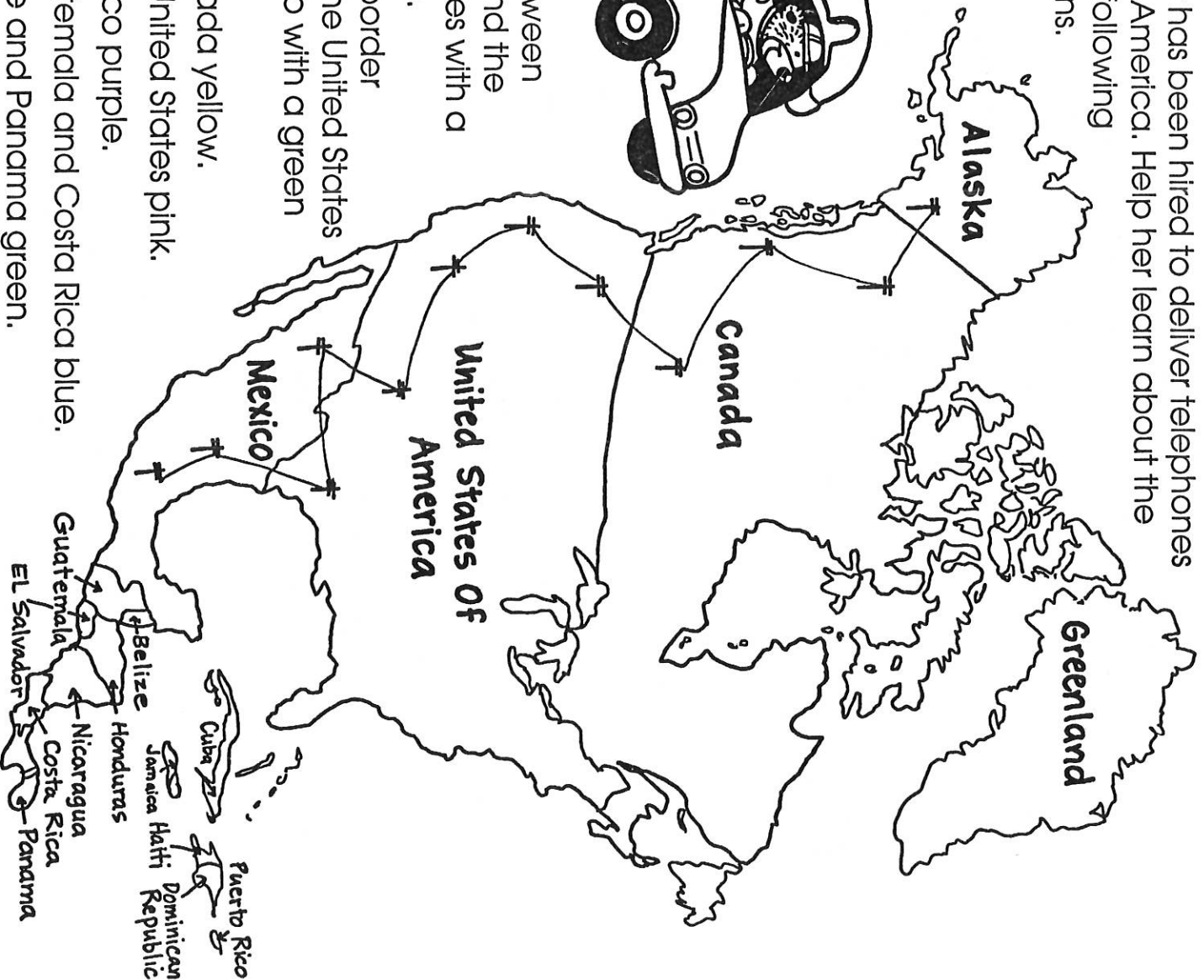
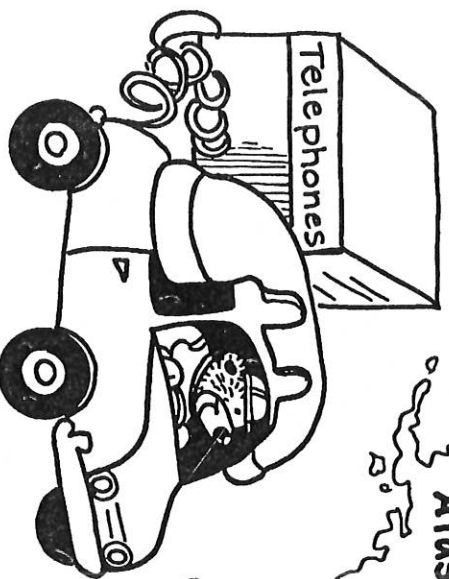
1. snowmobiles to **Antarctica**. . . . . Color it yellow.
2. ice cream to ocean liners in the

- |  |                   |
|--|-------------------|
| <b>Atlantic Ocean</b> and <b>Pacific Ocean</b> . . . . .         | Color them green. |
| 3. baby cribs to a day care center in <b>Europe</b> . . . . .    | Color it blue.    |
| 4. food to walruses in the <b>Arctic Ocean</b> . . . . .         | Color it purple.  |
| 5. a gorilla to return to its home in <b>Africa</b> . . . . .    | Color it red.     |
| 6. a wedding cake to a village in <b>South America</b> . . . . . | Color it brown.   |
| 7. fresh pineapple from Hawaii to <b>Asia</b> . . . . .          | Color it orange.  |
| 8. baby penguins to a zoo in <b>North America</b> . . . . .      | Color it black.   |
| 9. dinosaur bones to a museum in <b>Australia</b> . . . . .      | Color it red.     |
| 10. 20 scuba divers to the <b>Indian Ocean</b> . . . . .         | Color it green.   |

Name \_\_\_\_\_

# Truckloads of Telephones

Tamara Talker has been hired to deliver telephones all over North America. Help her learn about the continent by following these directions.



1. Trace the border between Canada and the United States with a red crayon.
2. Trace the border between the United States and Mexico with a green crayon.
3. Color Canada yellow.
4. Color the United States pink.
5. Color Mexico purple.
6. Color Guatemala and Costa Rica blue.
7. Color Belize and Panama green.
8. Color Nicaragua and El Salvador red.
9. Color Honduras brown.
10. Put a ★ on the place where you live.

Name \_\_\_\_\_



Oops! All the mail fell into a jumble.

Help the mail carriers find the right letters to put into their bags.

Hal Horse only delivers letters to states. Color his mail and bag red.

Gail Snail only delivers letters to cities. Color her mail and bag green.

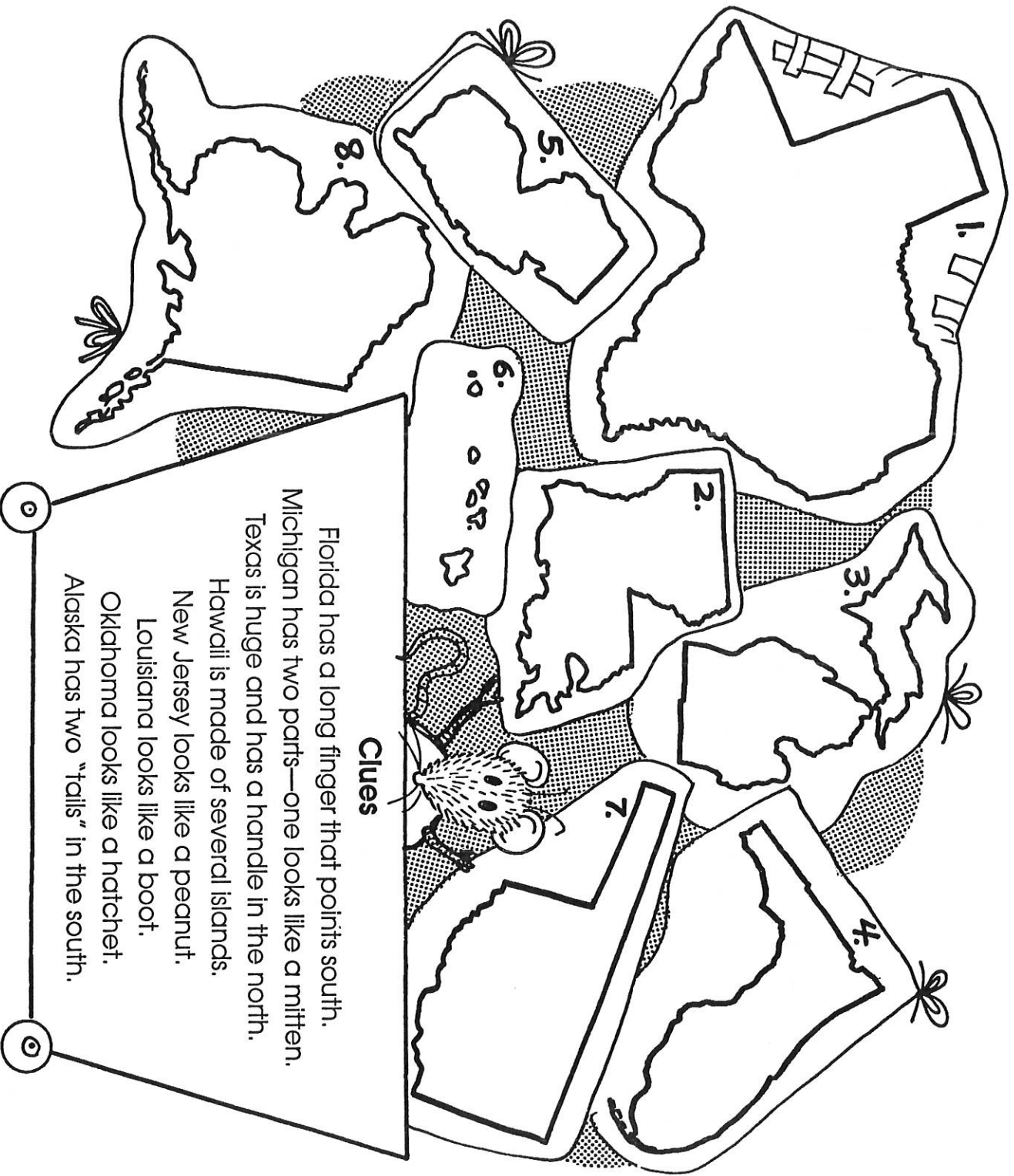
Gilbert Gull only delivers letters to countries. Color his mail and bag blue.



# Packages without Names

Charlotte has packages to deliver to different states in the United States. Each package has a picture of the state but no name. Can you recognize the states from their shapes?

Write the name of the state on each package. (See some clues below.)



Name \_\_\_\_\_

# Rabbit Relatives

Grandma and Grandpa Rabbit send mail to grandchildren all over the United States.

They have a lot of letters and packages ready for the mailman.

Use the map on the next page to show where their mail will go.

Follow the color code to color each state correctly.




## Color Code Package

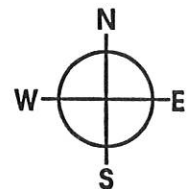
1. **Red** — a birthday card to little Roberta Floppy in St. Louis
2. **Green** — three boxes of carrot cookies to Phil in Philadelphia, Newt in New Orleans, and Bob in Boston
3. **Orange** — a model spaceship to Billie in the state where rockets are launched at Cape Canaveral
4. **Purple** — toys to triplets Sally, Sammy, and Sandy near the Grand Canyon
5. **Blue** — red sneakers to Ralph, who lives just west of the middle part of Lake Michigan
6. **Yellow** — balloons to Danny in the city of Dallas
7. **Pink** — a box of pretzels to Trina, who lives near the Golden Gate Bridge
8. **Brown** — valentines to Vicki and Val, who live near Great Salt Lake
9. **Red** — a rattle to newborn Willie, who lives near Mt. Rushmore
10. **Green** — skis to Adam in Seattle
11. **Blue** — brownies to little Millie in Niagara Falls
12. **Yellow** — a guitar to Gus in Nashville
13. **Purple** — mittens to Carrie and Connie in Connecticut
14. **Orange** — a kite to Henry in the state that touches Michigan and Lake Erie



# The United States



Name \_\_\_\_\_



# Lost Again!

Wrong-Way Walrus is lost again! Every time he goes out on a seaweed delivery, he ends up in the wrong body of water!

This time he popped up in the Gulf of Mexico instead of Boston Harbor. He needs to check his map and hurry on his way before all the seaweed ice cream melts!

Use the map on the next page (page 39) to help you follow these directions and answer the questions.

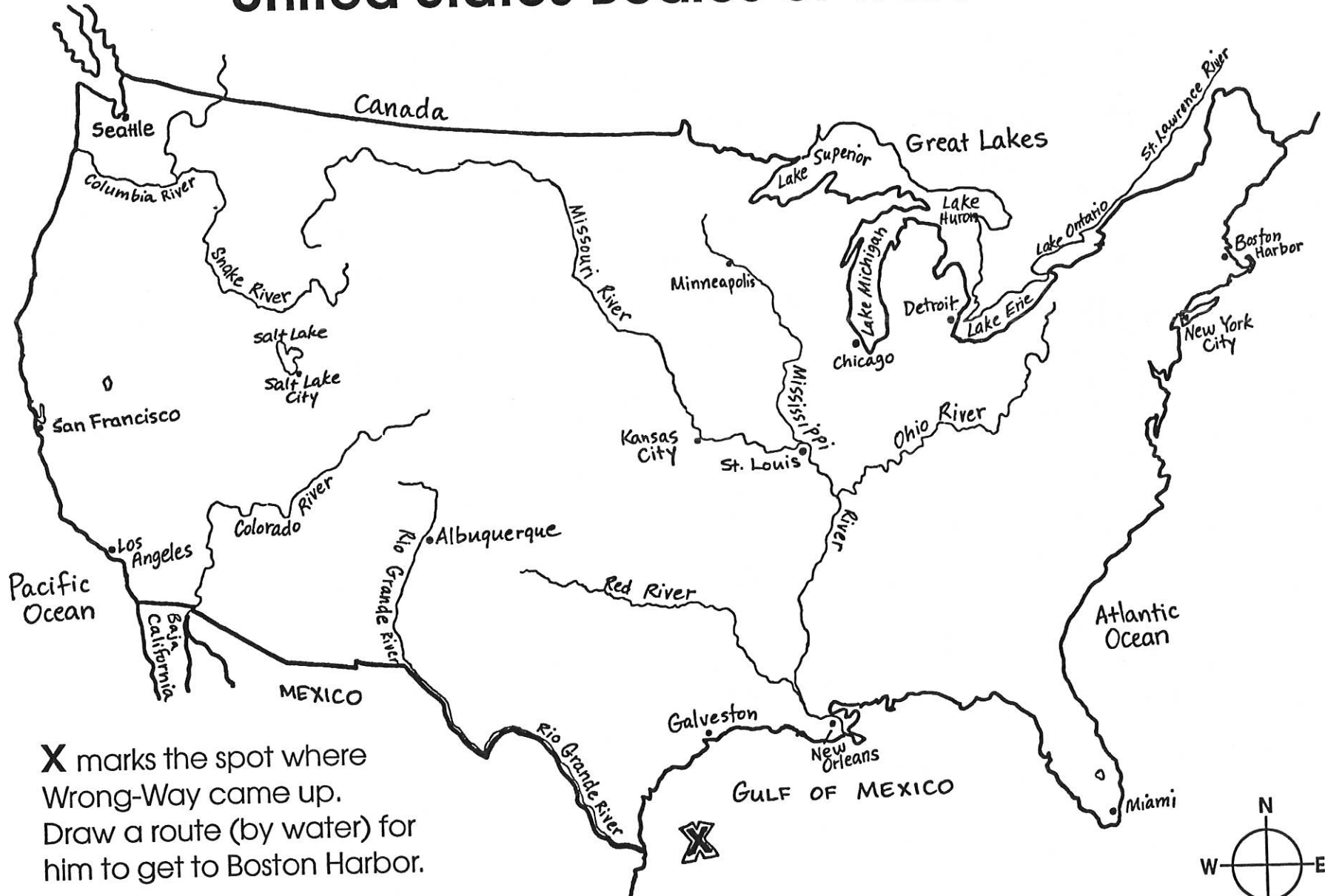
1. Draw a sailboat in the ocean that touches the east coast of the U.S.
2. Color the Great Lakes green. How many are there? \_\_\_\_\_
3. Draw a whale in the Pacific Ocean.
4. Trace the Colorado River in red.
5. Trace the Missouri River in blue.
6. Trace the Mississippi River in green.
7. Trace the St. Lawrence River in yellow.
8. Draw a red arrow to Boston Harbor.
9. The X on the map shows where Wrong-Way Walrus is. What body of water is he in? \_\_\_\_\_
10. What river flows into the Pacific Ocean? \_\_\_\_\_
11. What river flows into the Mississippi from the east? \_\_\_\_\_
12. Name a city on the Missouri River. \_\_\_\_\_
13. Name a city on the Rio Grande River. \_\_\_\_\_
14. Name a city on the Gulf of Mexico. \_\_\_\_\_
15. What river flows along the border between the U.S. and Mexico? \_\_\_\_\_
16. Name a city on Lake Michigan. \_\_\_\_\_



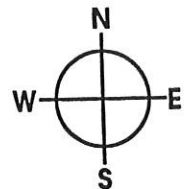
Name \_\_\_\_\_

Use with page 39.

# United States Bodies of Water



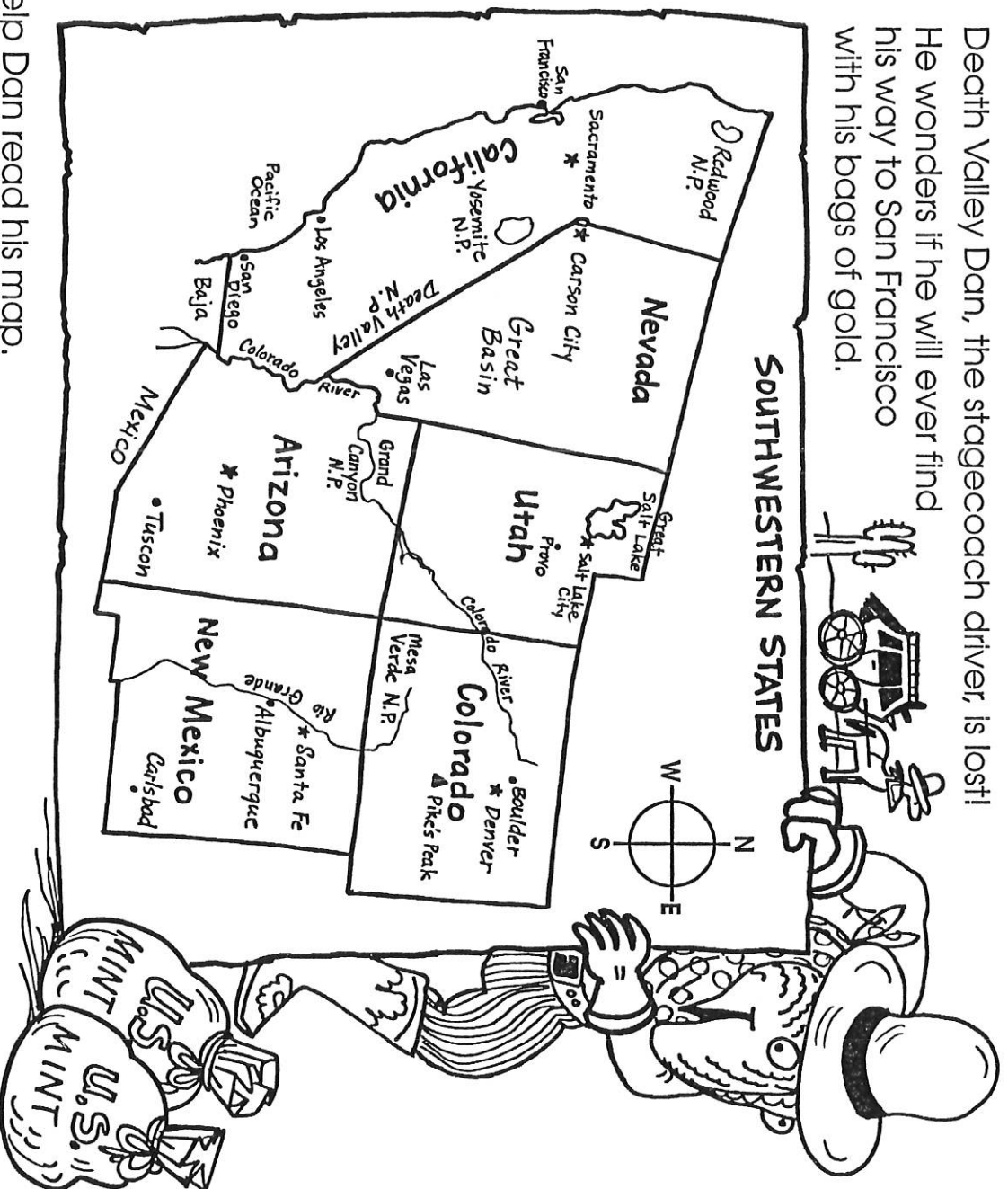
**X** marks the spot where Wrong-Way came up. Draw a route (by water) for him to get to Boston Harbor.



Name \_\_\_\_\_

# The Lost Stagecoach

Death Valley Dan, the stagecoach driver, is lost!  
He wonders if he will ever find  
his way to San Francisco  
with his bags of gold.



Help Dan read his map.

1. What state touches the Pacific Ocean? \_\_\_\_\_
2. What state is south of Utah? \_\_\_\_\_
3. The Grand Canyon is in \_\_\_\_\_
4. San Francisco is in the state of \_\_\_\_\_
5. What state is east of Arizona? \_\_\_\_\_
6. Is Nevada east or west of California? \_\_\_\_\_
7. Which state is home to the Great Salt Lake? \_\_\_\_\_
8. Where is Pike's Peak? \_\_\_\_\_
9. Dan is now in the state east of Utah. Where is he? \_\_\_\_\_
10. How many national parks are shown? (Look for N.P.) \_\_\_\_\_

Name \_\_\_\_\_

# Skeletons for the Schools

Gabe's job is to deliver science equipment to schools all over the United States.

The mileage chart tells him how far it is between cities. Use the chart to help him find the distances.

Cities	Chicago	Boston	Denver	Nashville	Washington DC
Chicago	0	1015	1010	930	715
Los Angeles	2030	3025	1020	2030	2690
Miami	1370	1480	2080	900	1040
Seattle	2030	3090	1300	2430	2790
Tucson	1740	2630	890	1615	2280

Write the answers in the blanks.

1. Chicago to Seattle \_\_\_\_\_ miles
2. Tucson to Nashville \_\_\_\_\_ miles
3. Washington, DC, to Los Angeles \_\_\_\_\_ miles
4. Boston to Miami \_\_\_\_\_ miles
5. Miami to Washington, DC \_\_\_\_\_ miles
6. Denver to Tucson \_\_\_\_\_ miles

7. Which 2 cities are farthest apart? \_\_\_\_\_ and \_\_\_\_\_
8. Which 2 cities are closest together? \_\_\_\_\_ and \_\_\_\_\_

Name \_\_\_\_\_






# Fresh Air for Floats

Wanda has an unusual job! She pumps air into the floats at water parks. She gets to try out the floats at every park, too!

Use the information chart to answer some questions about the parks she visits.



PARKS		Number of Water Slides	River	Open Year-Round	Overnight Camping	Snack Bar	Adults Allowed	Floats for Rent
Water Wonderworld	12	X	X		X	X	yes	X
Wild West Waterworks	7	X			X	X	yes	X
Dino-Land Park	0	X	X		X	X	no	
Water Thrills & Chills	10	X	X			X	yes	
Wet & Wild	14	X	X				no	X

Write the answers.

1. Can Wanda camp overnight at Wet & Wild? \_\_\_\_\_
2. Will Wanda have floats to fill at Dino-Land Park? \_\_\_\_\_
3. Can Wanda get a snack at Wild West Waterworks? \_\_\_\_\_
4. How many water slides are there at Water Thrills & Chills? \_\_\_\_\_
5. How many water slides are there at Water Wonderworld? \_\_\_\_\_
6. Is there a river at Wet & Wild? \_\_\_\_\_
7. Are adults allowed at Dino-Land? \_\_\_\_\_
8. Are adults allowed at Wild West? \_\_\_\_\_
9. Can Wanda camp overnight at Dino-Land? \_\_\_\_\_
10. Which park is not open year-round? \_\_\_\_\_

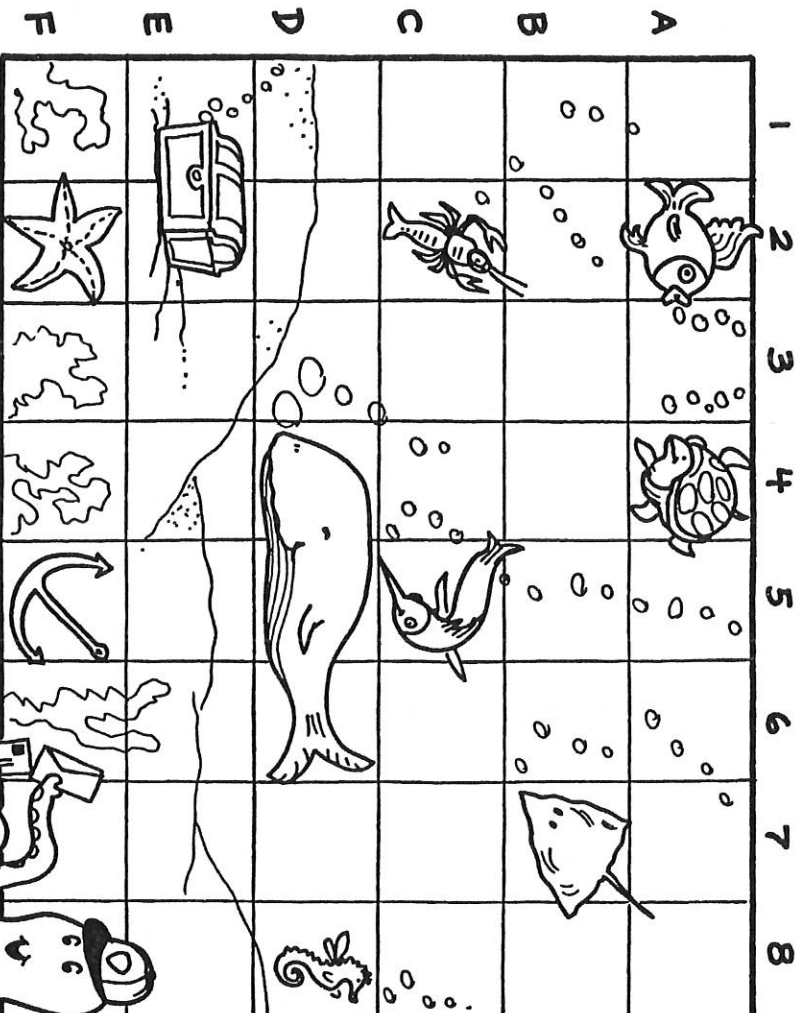
Name \_\_\_\_\_

# Underwater Invitations

The Sea Bottom Ball is the biggest event of the year in the underwater world. Oliver is delivering the invitations today. Help Oliver get them to the right places.

Find the square on the grid that holds each undersea object.

**For example:** The starfish is in the square where row F and row 2 meet. It is located at F, 2 on the grid.



Write the location on the grid.

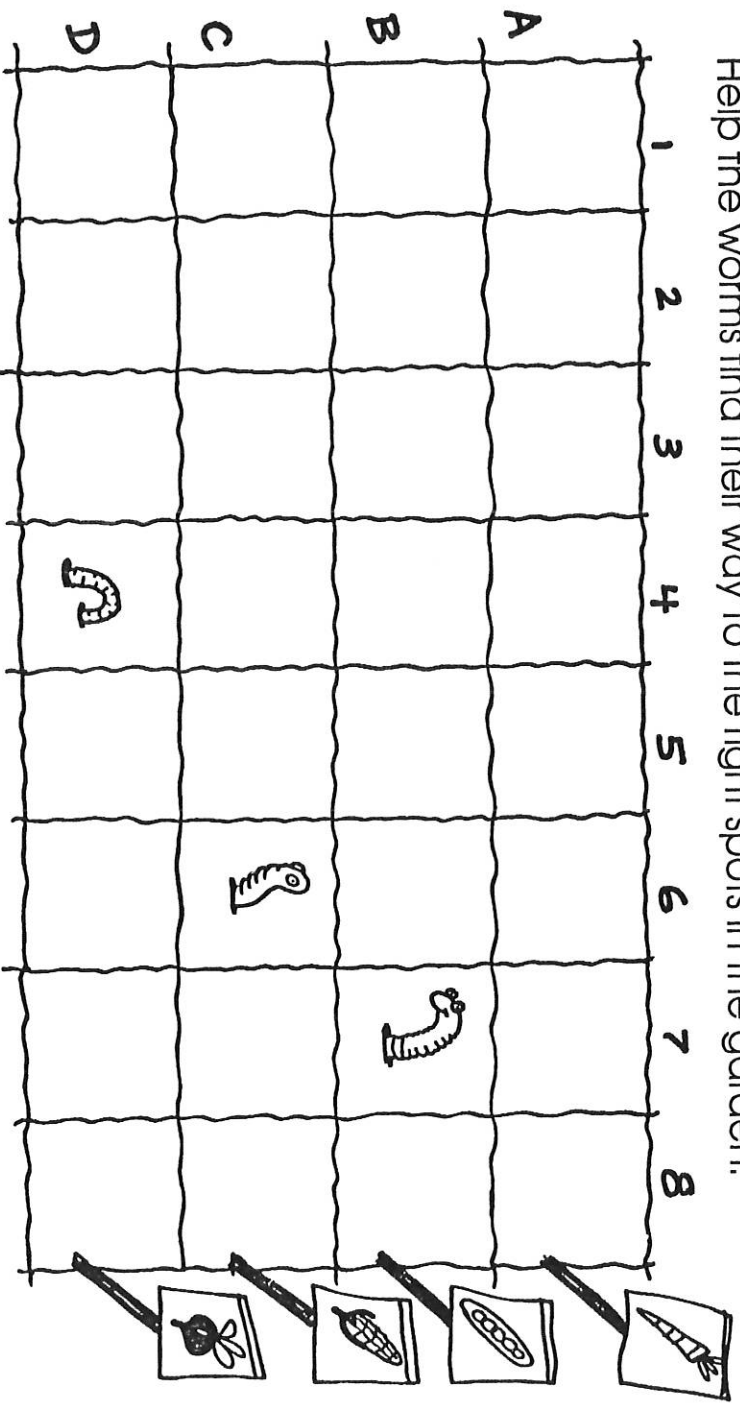
1. Where is the fish? \_\_\_\_\_
2. Where is the sea horse? \_\_\_\_\_
3. Where is the anchor? \_\_\_\_\_
4. Where is the lobster? \_\_\_\_\_
5. Where is the stingray? \_\_\_\_\_
6. Where is the swordfish? \_\_\_\_\_
7. What is in E, 1 and E, 2? \_\_\_\_\_
8. What is in D, 4; D, 5; and D, 6? \_\_\_\_\_

Color the picture.

Name \_\_\_\_\_

# Worms for the Garden

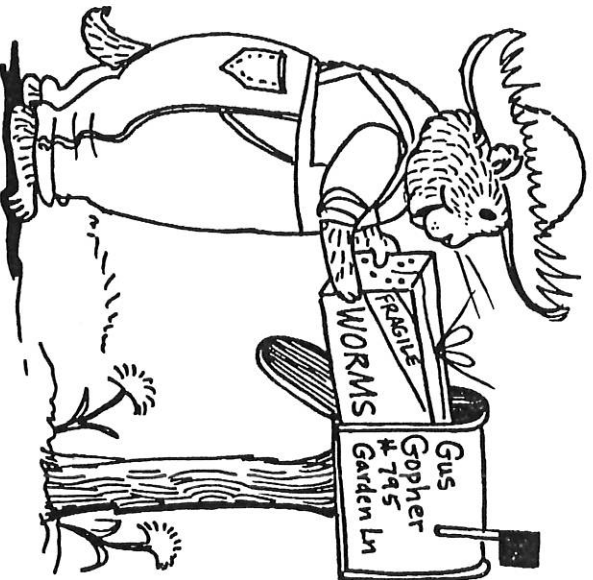
Gardener Gus is getting some nice, fat worms for his garden. The worms make the soil good for growing healthy plants. Help the worms find their way to the right spots in the garden.



1. Some worms are already in the garden. Where are they?

\_\_\_\_\_, \_\_\_\_\_, and \_\_\_\_\_

2. Draw a worm in A, 5.
3. Draw two worms in D, 7.
4. Draw a worm in B, 3.
5. Draw a worm in C, 2.
6. Draw a worm in B, 1.
7. Draw a worm in A, 4.
8. Draw a worm in D, 6.
9. Draw a worm whose head comes up in C, 6 and tail comes up in B, 8.
10. Draw two worms in the same hole in D, 2.

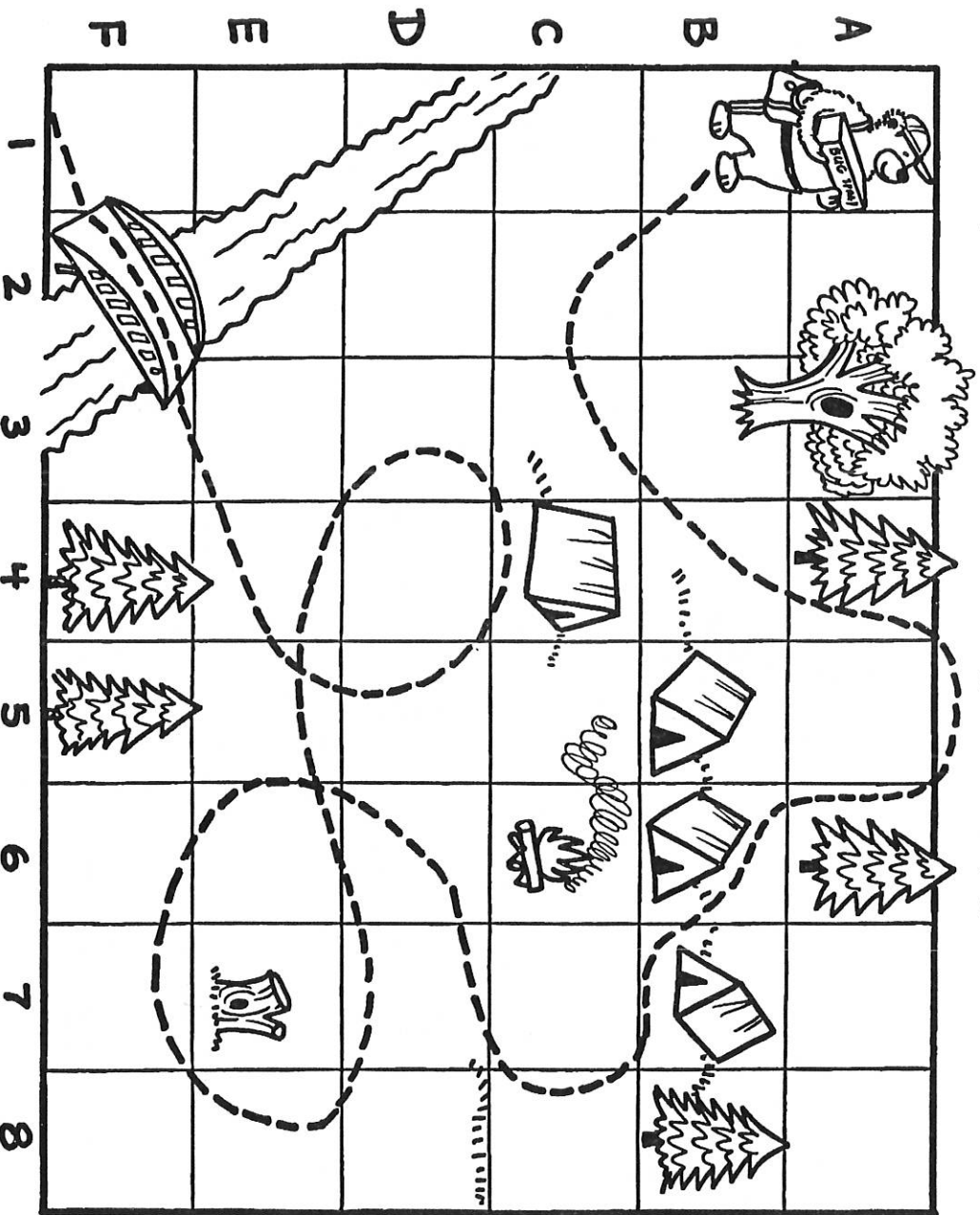


Name \_\_\_\_\_








# Delivery to Happy Camp

Bernie the Mail Bear has bug spray for the campers at Happy Camp. Finish the map that shows his trail through the campground.



Draw these things on the map in the correct places.

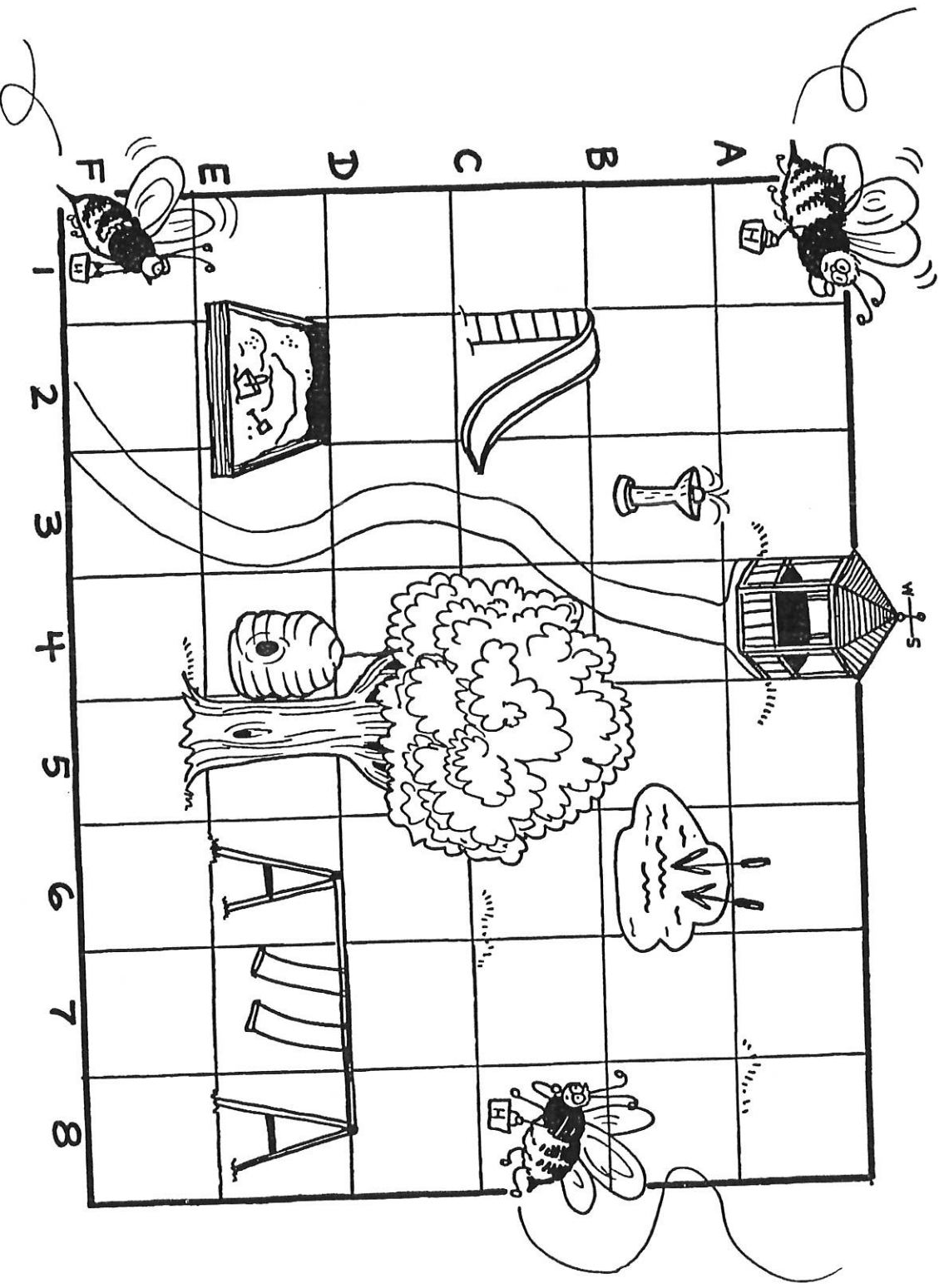
1. Bernie hopped over a puddle  at B, 2.
2. He went around a big tree  at A, 5.
3. Bernie put a package inside a tent  at C, 8.
4. Then he tripped over a rock  in E, 6.
5. He bumped into a trash can  in E, 5.
6. He stopped to rest on a stump  in D, 4.
7. He crossed over a \_\_\_\_\_ in F, 2.





Name \_\_\_\_\_

# Search for the Missing Flowers

The delivery bees are trying to gather honey to deliver to the beehive, but all the flowers are missing!

Follow the directions, and draw the flowers for the bees to find.



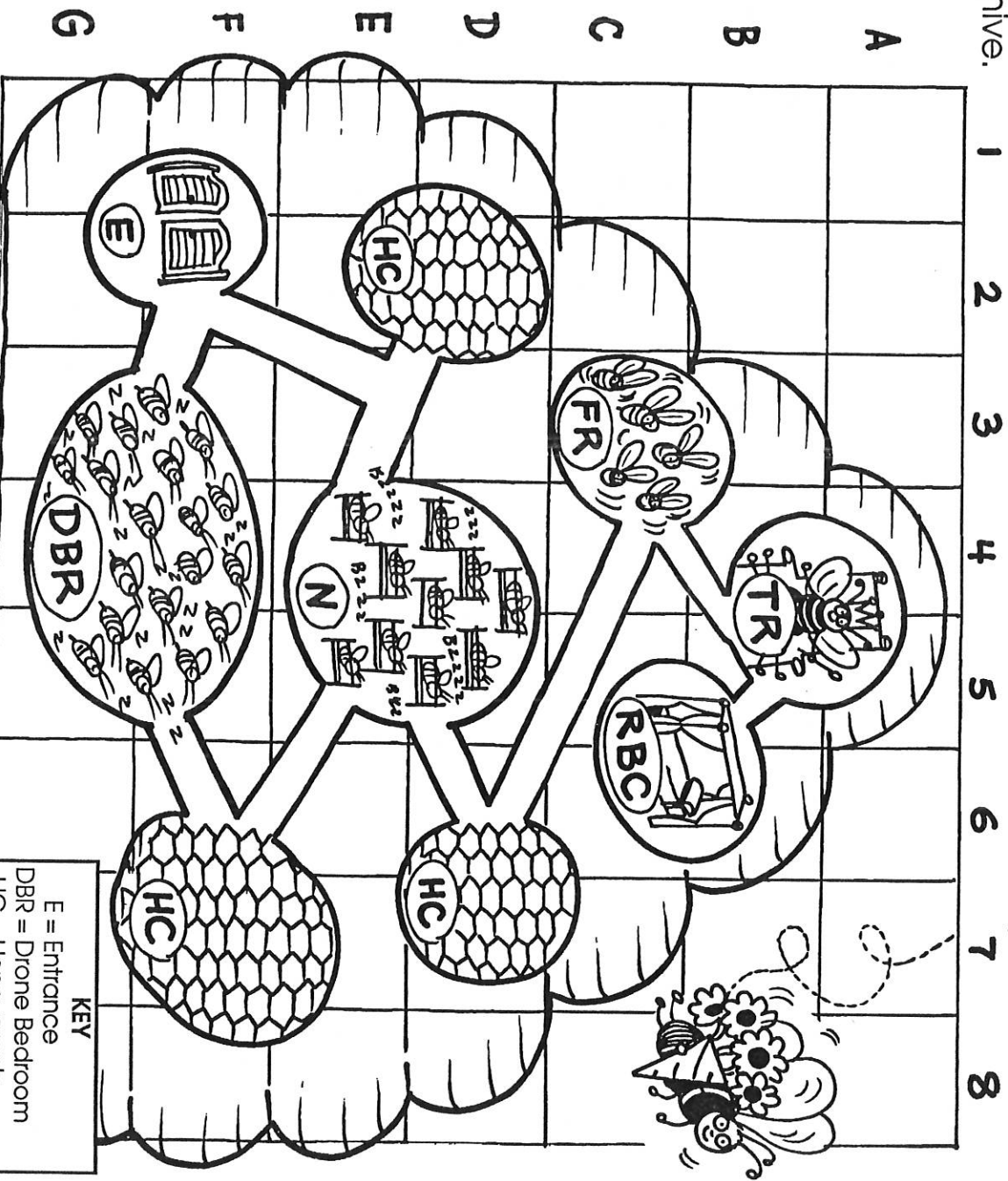
1. Draw 2  in D, 2.
2. Draw a  in A, 2 and A, 7.
3. Draw a  in C, 1 and F, 7.
4. Draw a  in D, 7 and F, 4.
5. Where is the fountain? \_\_\_\_\_
6. Where is the beehive? \_\_\_\_\_
7. Where is the sandbox? \_\_\_\_\_
8. Where is the slide? \_\_\_\_\_

Name \_\_\_\_\_

# Flowers for the Queen

Beatrice's Flower Shop has a delivery of flowers for the queen bee. Beatrice needs a grid to find the queen's chamber in the hive.

Use the grid and the map key to help Beatrice find her way around the hive.



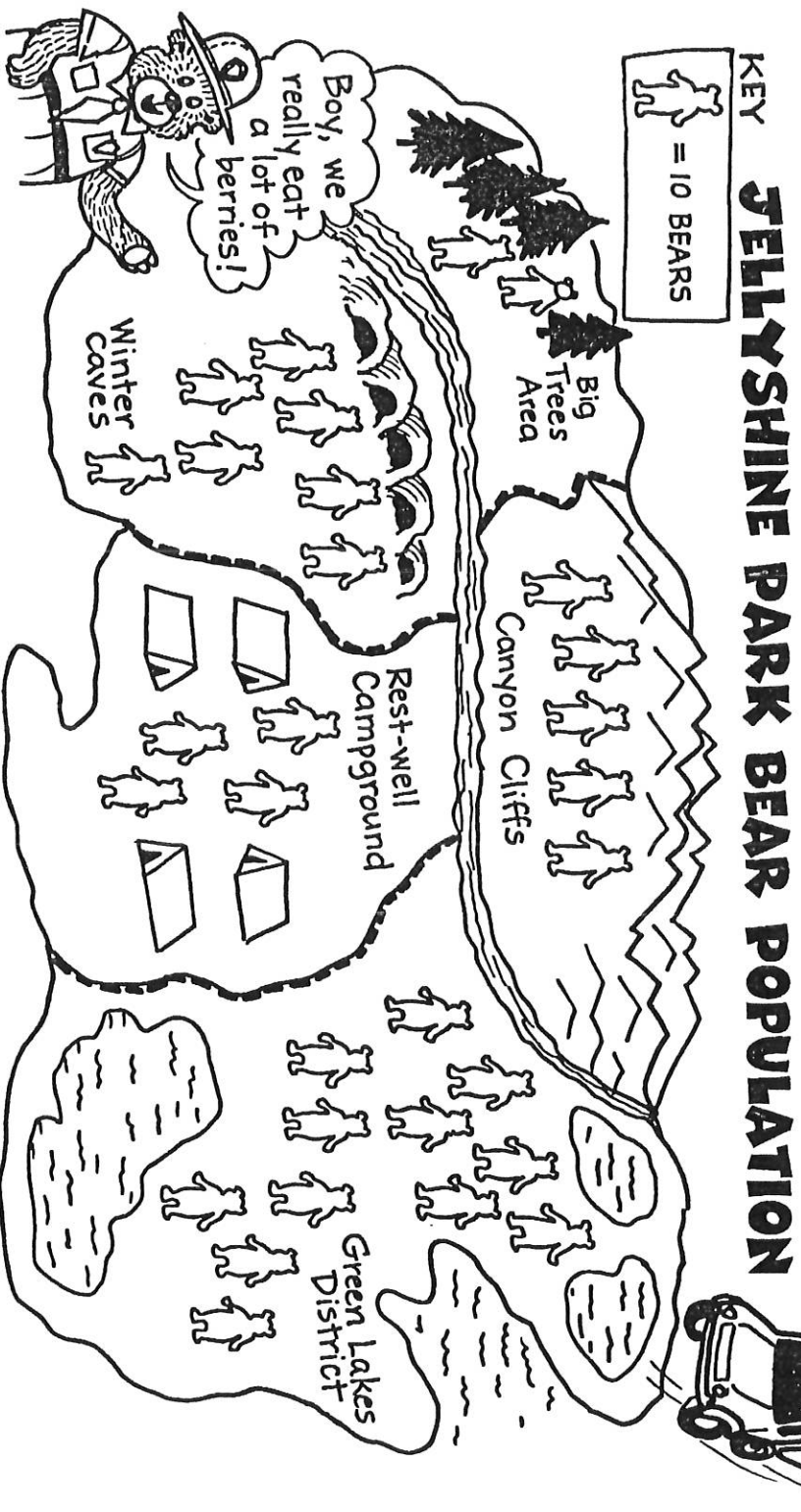
1. Is the entrance in E, 2? \_\_\_\_\_
2. How many sections does the drone bedroom touch? \_\_\_\_\_
3. Is there a honeycomb at B, 7? \_\_\_\_\_
4. What sections does the nursery touch? \_\_\_\_\_, \_\_\_\_\_, \_\_\_\_\_, and \_\_\_\_\_
5. The fan room is mostly in \_\_\_\_\_.
6. Where is the queen? \_\_\_\_\_, \_\_\_\_\_, \_\_\_\_\_, and \_\_\_\_\_

Name \_\_\_\_\_

# The Whereabouts of Bears

The hungry bears in Jellyshine Park are eating the campers' food. Camper food is not good for bears, so the ranger has ordered tons of berries.

The truck driver has a map of the bear population in Jellyshine Park. Use the map to help her figure out where all the bears are.



1. Which section of the park will need the most berries? \_\_\_\_\_
2. What is the bear population in the Winter Caves Area? \_\_\_\_\_
3. Which has more bears: the campground or the Green Lakes District? \_\_\_\_\_
4. What is the bear population in the Canyon Cliffs Area? \_\_\_\_\_
5. Which area has the smallest bear population? \_\_\_\_\_
6. What is the bear population in the campground? \_\_\_\_\_

Name \_\_\_\_\_

# No Shooting Allowed

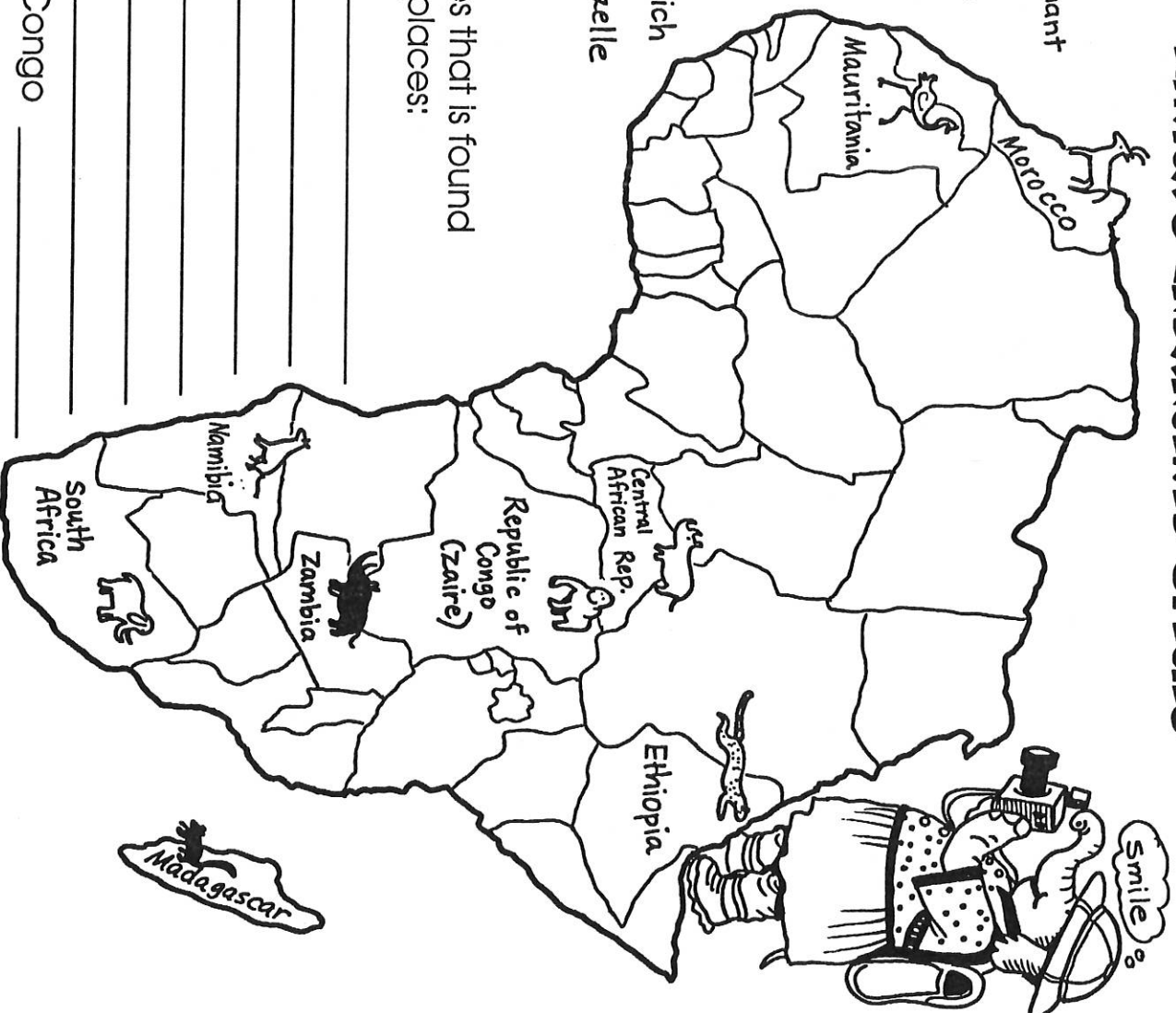
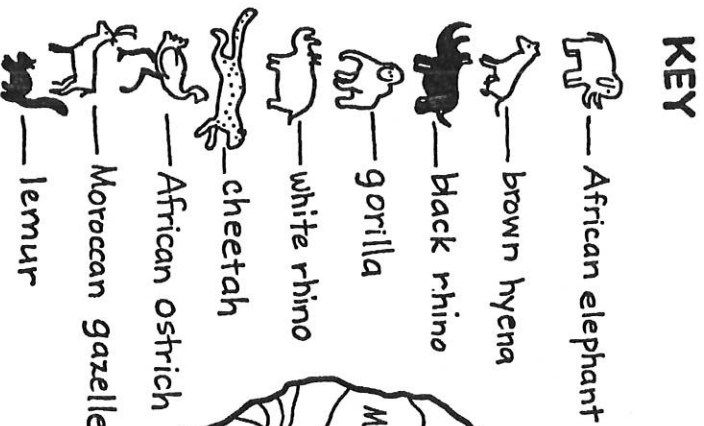
In Africa, dozens of photographers track endangered animals.

They only shoot these animals with cameras!

Frannie Photog's map of Africa's endangered species helps her get to the right places.

## AFRICA'S ENDANGERED SPECIES

### KEY



Name the species that is found in each of these places:

1. Mauritania \_\_\_\_\_
2. Namibia \_\_\_\_\_
3. Zambia \_\_\_\_\_
4. Ethiopia \_\_\_\_\_
5. Morocco \_\_\_\_\_
6. South Africa \_\_\_\_\_
7. Republic of Congo \_\_\_\_\_
8. Island of Madagascar \_\_\_\_\_
9. Central African Republic \_\_\_\_\_

Name \_\_\_\_\_



# Bananas for the Neighbors

Juan grows bananas to be delivered all over South America! His map shows some products produced in the countries he visits.

Write the name of a country that shows these products on the map.

## PRODUCTS OF SOUTH AMERICA

1. cattle and sheep

2. coffee, fish, and oil

3. cattle, oil, and coffee

4. fish

5. grain

6. diamonds

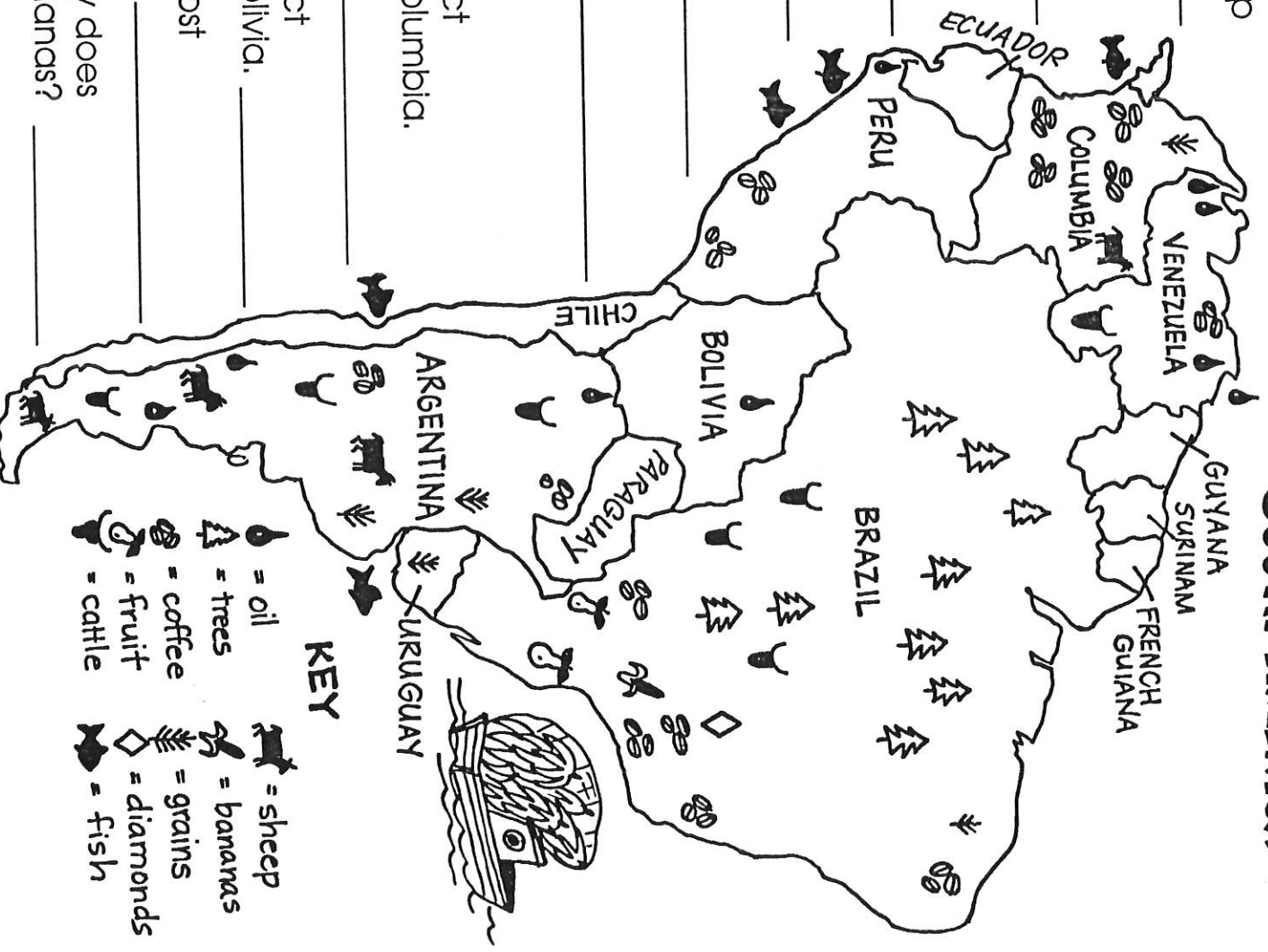
Write the answers.

7. Name a product produced in Columbia.

8. Name a product produced in Bolivia.

9. Where is the most timber grown?

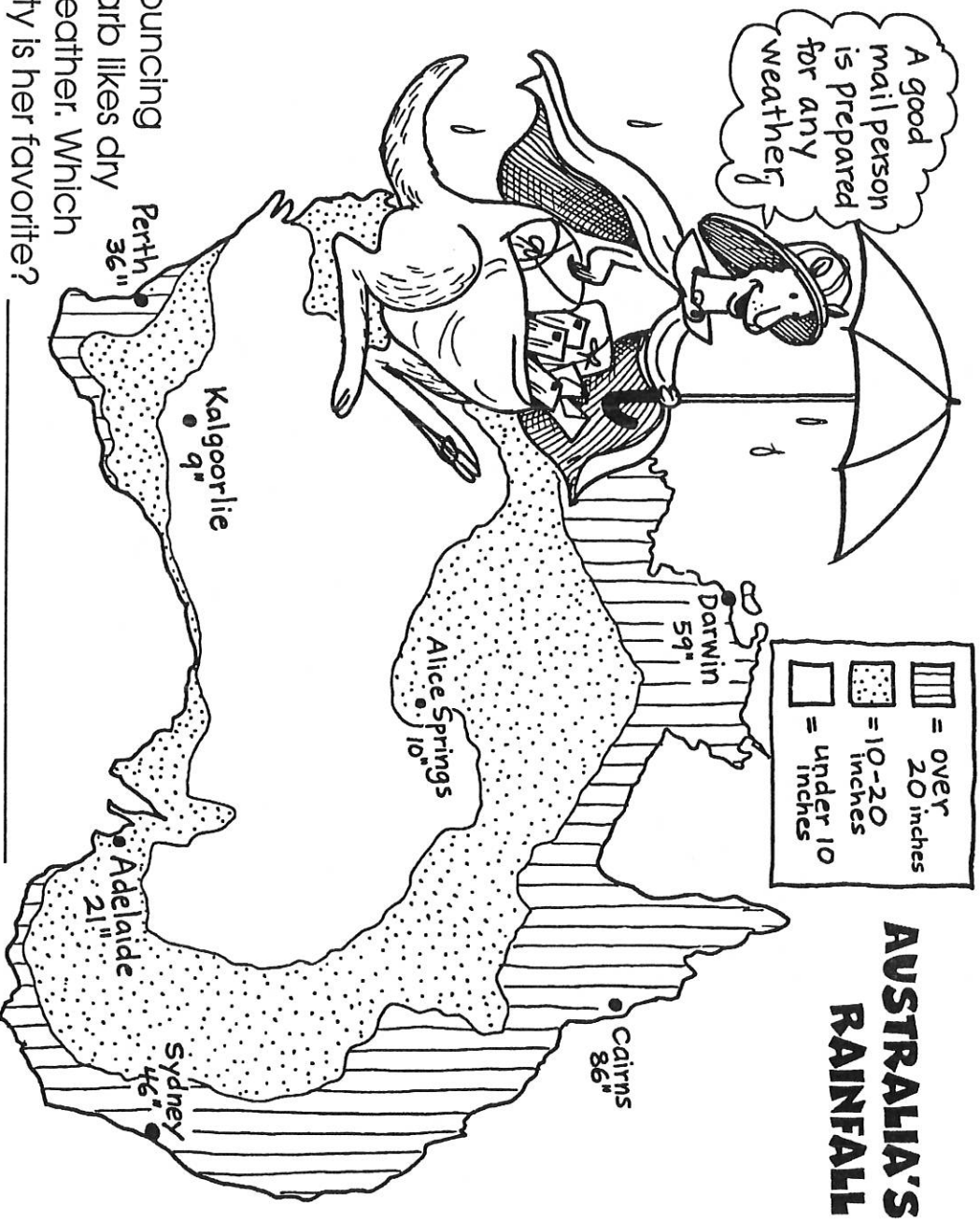
10. In what country does Juan grow bananas?



Name \_\_\_\_\_

# In All Kinds of Weather

Bouncing Barb the mail carrier never fails to deliver the mail on time! She carries a weather map so she will be prepared for all kinds of weather. Use her weather map to answer the questions about Australia's weather.



1. Bouncing Barb likes dry weather. Which city is her favorite? \_\_\_\_\_
2. Which is the wettest city she'll deliver the mail to? \_\_\_\_\_
3. Which gets more rain, southern or eastern Australia? \_\_\_\_\_
4. Which part of the country is the driest, the middle or the coastline? \_\_\_\_\_
5. Can they expect more rain in Kalgoorlie or Perth? \_\_\_\_\_
6. What is the rainfall each year in Sydney? \_\_\_\_\_
7. What rainfall is expected each year in Darwin? \_\_\_\_\_

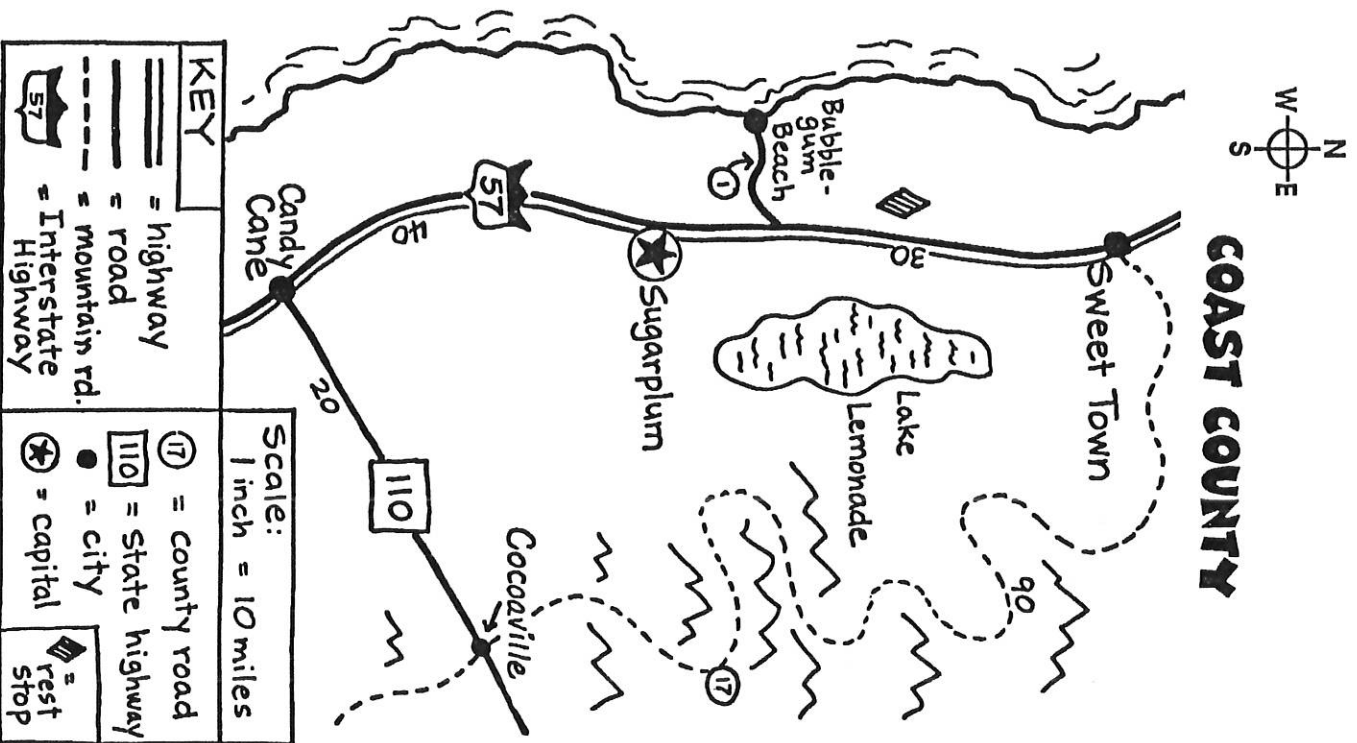
Name \_\_\_\_\_

# On the Road Again

Freddy Fox has to drive from Cocoaaville to Sweet Town to deliver chocolate chips to the Crispy Cookies Company.

It's a long way, but Freddy has a good road map.

Read his map to find the answers to the questions.



1. What capital city is shown?

\_\_\_\_\_

2. On the scale,  
1 inch = \_\_\_\_\_ miles.

3. Candy Cane is on  
Interstate Number \_\_\_\_\_.

4. Does Route 110 go  
through Cocoaaville? \_\_\_\_\_

5. Is Lake Lemonade  
east of Interstate 57? \_\_\_\_\_

6. The county road goes  
from Cocoaaville to  
\_\_\_\_\_.

7. How far is it from Cocoaaville  
to Candy Cane?  
\_\_\_\_\_ miles

8. What route goes  
from Interstate 57 to  
Bubblegum Beach?  
\_\_\_\_\_



# A Puzzling Delivery

Miss Cross, the puzzle champion, has waited all day for the newspaper with the new crossword puzzle in it.

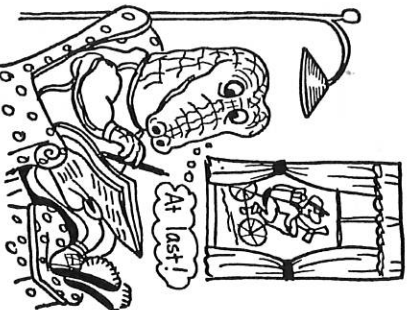
Finally it has arrived!

Today's puzzle uses map words.

Help her solve it with the words in the **Word Box**.

## WORD BOX

poles	key
equator	bay
continent	road
west	states
peninsula	ocean
scale	sea
hemisphere	island



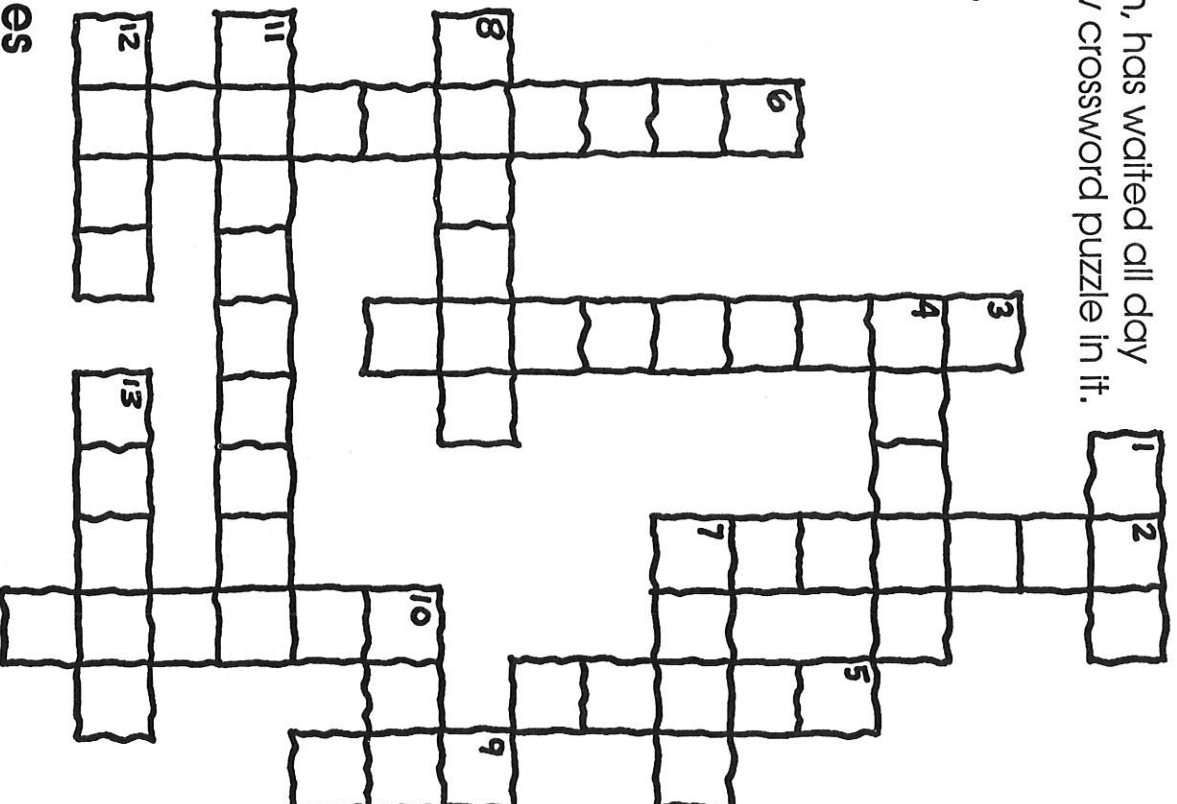
## Clues

### Across

1. part of a map that shows symbols
4. largest body of water in the world
7. way to travel between cities
8. land surrounded by water
10. another name for ocean
11. land surrounded on 3 sides by water
12. the opposite of east
13. The \_\_\_\_\_ are at the top and bottom of Earth.

### Down

2. imaginary line around center of Earth
3. large body of land
5. tells distances on a map
6. half of the Earth
9. area of water sheltered by land
10. The United States has 50 of these.

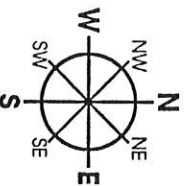


Name \_\_\_\_\_


# Where Are the Elephants?

Homer has a load of hay for the circus elephants.

Complete the directions on the next page to help Homer find the elephant compound.



## HAPPYTOWN CIRCUS & CARNIVAL



Name \_\_\_\_\_

Use with page 55.

54

Write Directions



Use the map on page 54 and the compass to complete the directions below.

Homer travels \_\_\_\_\_ until the road turns \_\_\_\_\_. When the road splits at Circus Circle, he turns right and travels \_\_\_\_\_. At Cotton Candy Lane, he turns right again and travels \_\_\_\_\_. Oops! There is a big curve in the road. Homer turns \_\_\_\_\_ and then \_\_\_\_\_.

Whew! He finally reaches the elephant compound.



Follow the directions and answer the questions.

1. Color the ride that is northeast from the Big Top Tent.
2. Color the tent that is southeast from the Big Top Tent.
3. Color the booth that is in the northwest corner.
4. What is southwest of the Big Top?  
\_\_\_\_\_
5. Will Homer find elephants west of the Big Top? \_\_\_\_\_
6. Is the Roller Coaster north of the Big Top? \_\_\_\_\_
7. Is the Ring Toss west of the Big Top? \_\_\_\_\_
8. Is the Food Tent north of the Roller Coaster? \_\_\_\_\_
9. Is the Clown Tent farther east than the hay truck? \_\_\_\_\_
10. Can you buy cotton candy to the southeast of the Food Tent? \_\_\_\_\_

Name \_\_\_\_\_

# Where Are the Stamps?

Edward, the mail bear, is waiting at the door for Gilda's letter.

Gilda is madly searching her room for a stamp to put on the letter. Where are the stamps?

Make a map of Gilda's room.


Include these things on the map:

- a title
- a scale
- symbols
- a key
- a place for the stamps

Title:

Scale:

Key

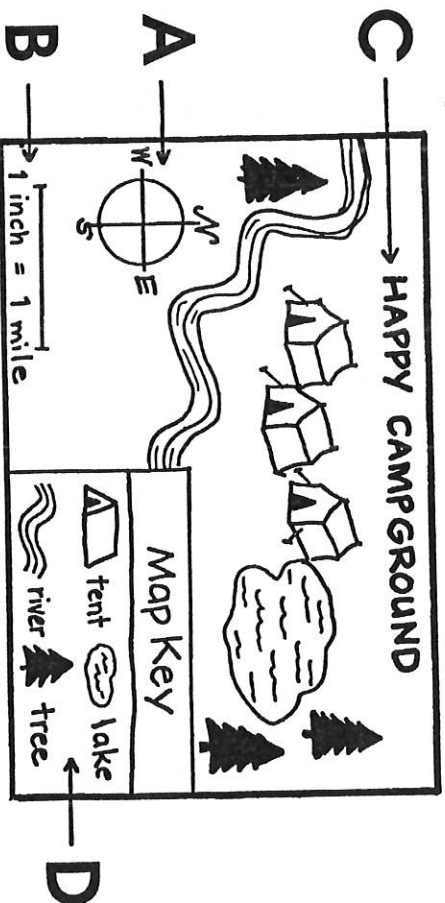


Name \_\_\_\_\_

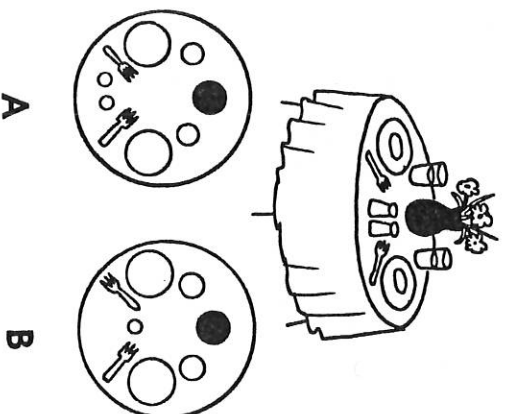
# Map & Geography Skills Test

Look for these parts of the map. Write the letter for each one next to its name.

- \_\_\_\_\_ 1. title
- \_\_\_\_\_ 2. key
- \_\_\_\_\_ 3. scale
- \_\_\_\_\_ 4. compass

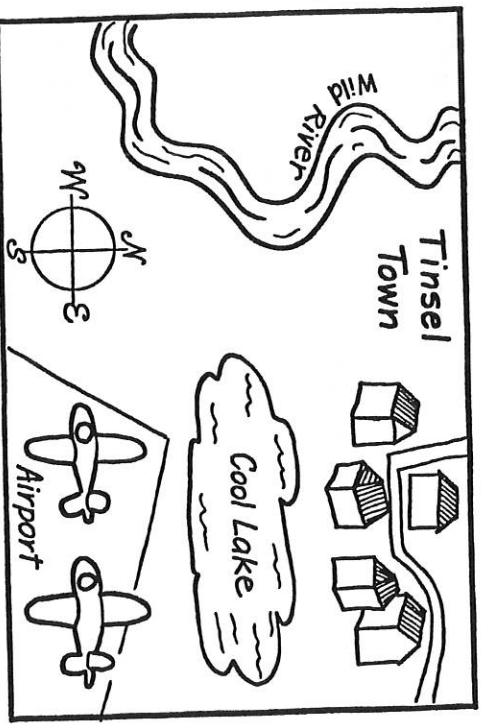


5. Which one is the map that correctly shows the things on the table?  
Circle the letter of the correct map.



Use the map to answer the questions.  
Write N, S, E, or W in each blank.

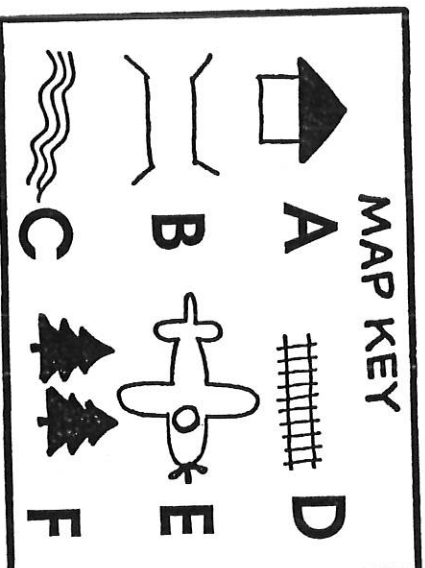
6. The town is \_\_\_\_\_ of the airport.
7. The river is \_\_\_\_\_ of the town.
8. The lake is \_\_\_\_\_ of the river.
9. The town is \_\_\_\_\_ of the lake.
10. The airport is \_\_\_\_\_ of the lake.



Name \_\_\_\_\_

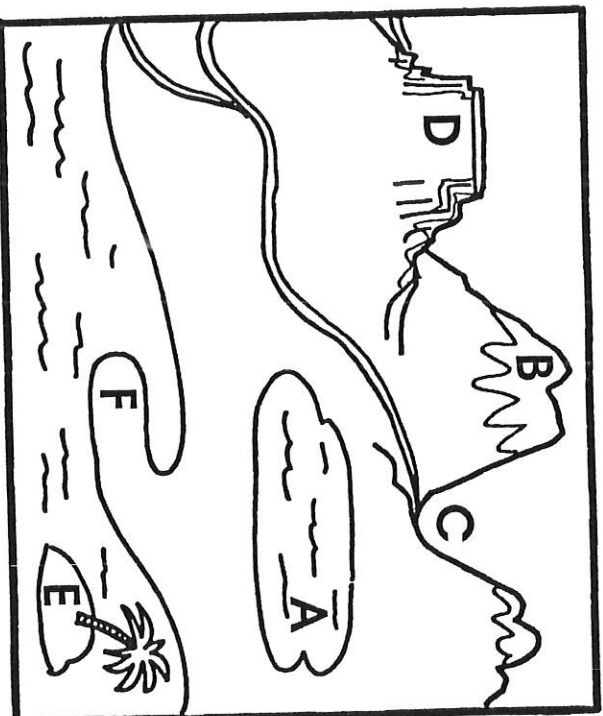
Use the map key to match the words to the symbols.  
Write the correct letter next to the word for each symbol.

- \_\_\_\_ 11. river
- \_\_\_\_ 12. house
- \_\_\_\_ 13. railroad track
- \_\_\_\_ 14. airport
- \_\_\_\_ 15. forest
- \_\_\_\_ 16. bridge



Write the correct letter from the map to match each landform name.

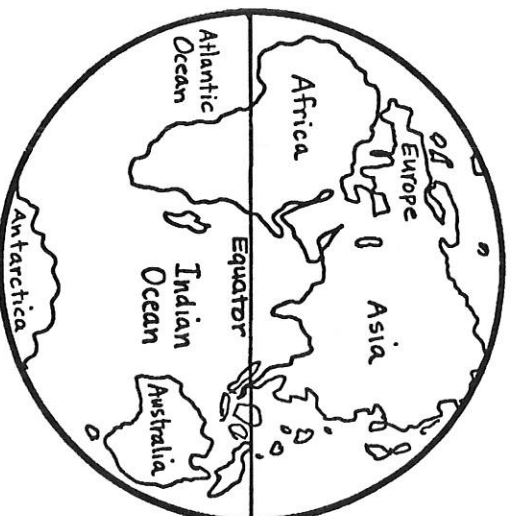
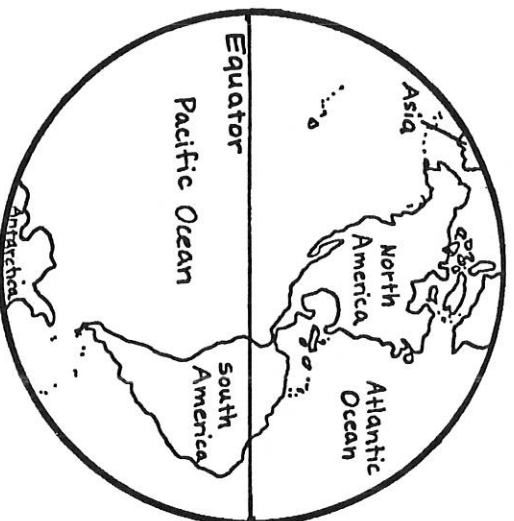
- \_\_\_\_ 17. island
- \_\_\_\_ 18. mountain
- \_\_\_\_ 19. lake
- \_\_\_\_ 20. plateau
- \_\_\_\_ 21. peninsula
- \_\_\_\_ 22. valley



- 23. Circle the state that is in the western part of the United States.  
New York                      Florida                      Michigan                      California
- 24. Circle the state that is in the southern part of the United States.  
California                      Colorado                      Florida                      Maine
- 25. Circle the state that is in the eastern part of the United States.  
Texas                      New Jersey                      Arizona                      California

Name \_\_\_\_\_

Use the maps to find the hemispheres for these continents and oceans.  
Write **E** for Eastern, **W** for Western, and **B** for both.



**Western Hemisphere**

**Eastern Hemisphere**

\_\_\_ 26. Africa      \_\_\_ 27. The Atlantic Ocean      \_\_\_ 29. Europe

\_\_\_ 28. South America      \_\_\_ 30. Asia

31. Circle the word that is NOT a continent.

Asia      Africa      Texas      North America      Australia

32. Circle the word that is NOT a city.

Dallas      Chicago      San Francisco      Europe      Seattle

33. Circle the word that is NOT a state.

Iowa      Pennsylvania      Kansas      Boston      Georgia

34. Circle the word that is NOT a country.

France      India      Chicago      Mexico      Canada

35. Circle the country that is on the northern border of the United States.

Alaska      Germany      Canada      Montana      Mexico





36. Circle the country that is a neighbor to the south of the United States.







Japan      Mexico      Canada      China      Russia

Name \_\_\_\_\_



Use the grid to help you find things on the picnic table.

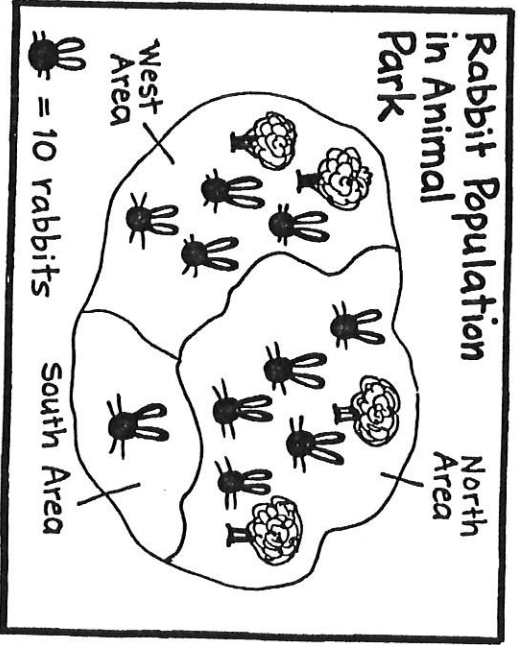
- \_\_\_\_ 37. Where is the  ?
- \_\_\_\_ 38. Where is the  ?
- \_\_\_\_ 39. Where is the  ?
- \_\_\_\_ 40. Where is the  ?

A				
B				
C				
D				

1 2 3 4

Use the map to answer the questions.

- \_\_\_\_ 41. How many rabbits are in the north area of the park?
- \_\_\_\_ 42. What area has the least rabbits?
- \_\_\_\_ 43. What area has 40 rabbits?



Write the word that matches the definition.

- \_\_\_\_ 44. tells distances on a map      west
- \_\_\_\_ 45. land surrounded by water      continent
- \_\_\_\_ 46. opposite of east      ocean
- \_\_\_\_ 47. a large body of land      scale
- \_\_\_\_ 48. a large body of water      title
- \_\_\_\_ 49. tells what a map is about      compass
- \_\_\_\_ 50. tells directions on a map      island

Name \_\_\_\_\_